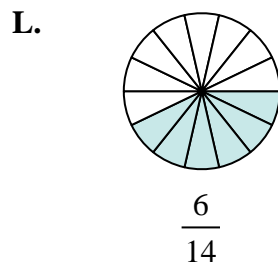
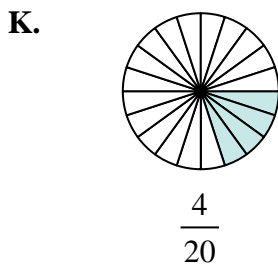
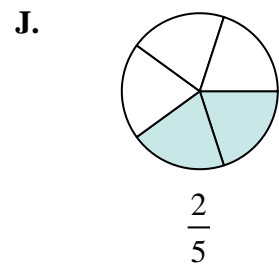
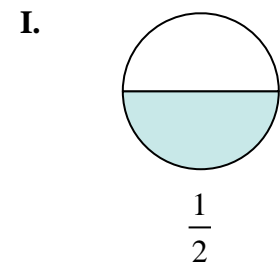
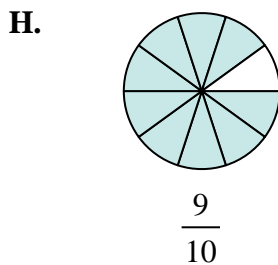
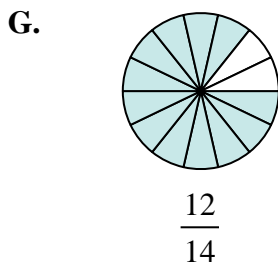
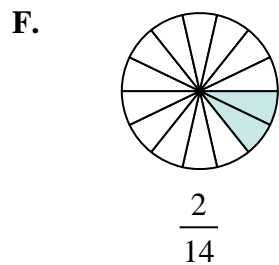
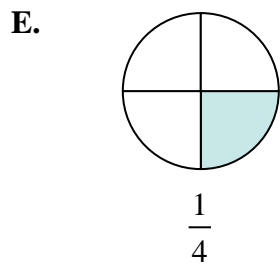
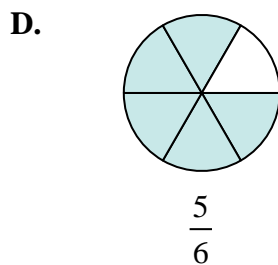
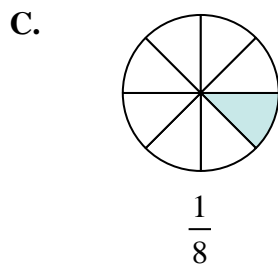
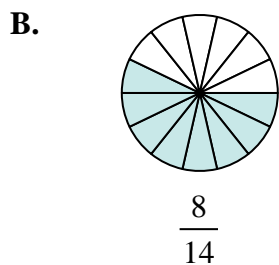
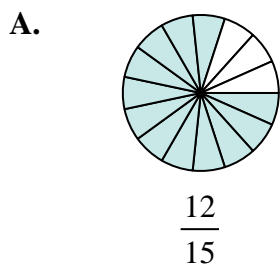
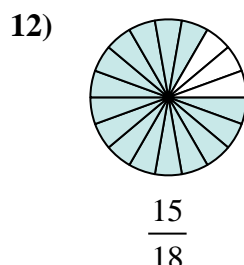
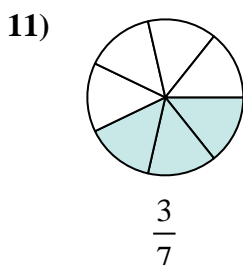
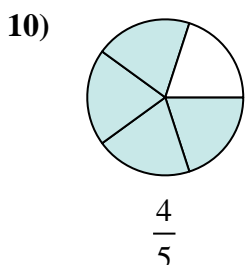
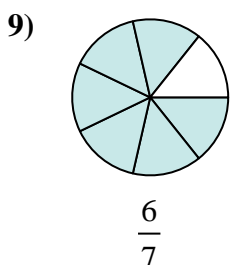
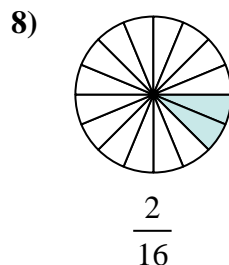
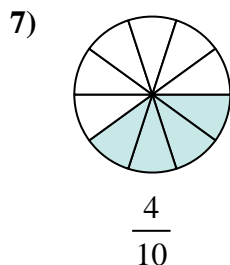
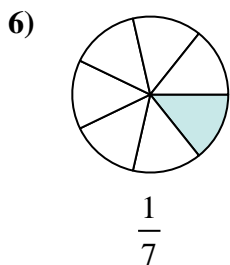
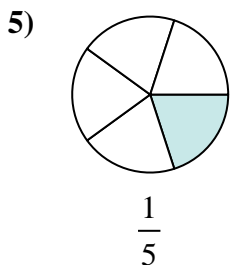
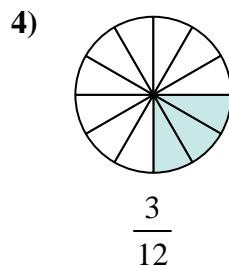
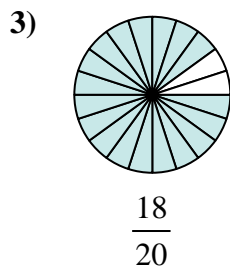
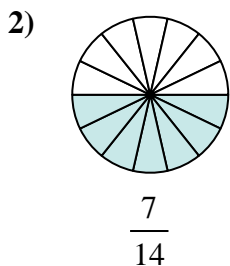
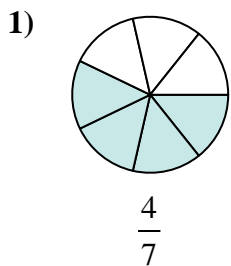




Determine which letter best represents an equivalent fraction.

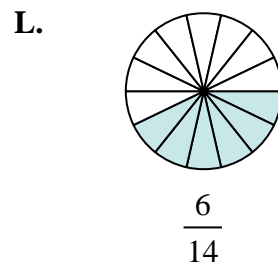
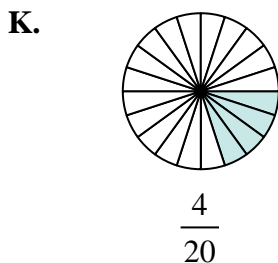
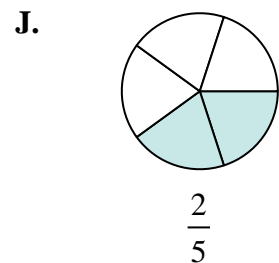
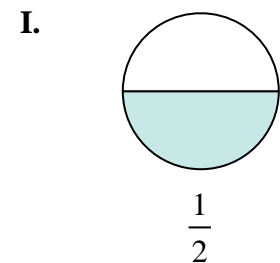
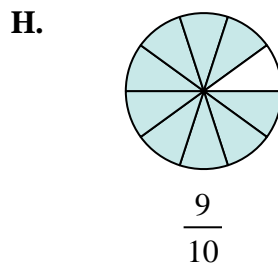
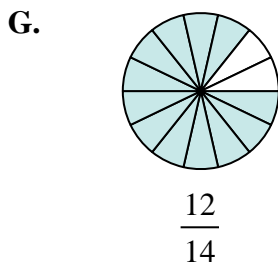
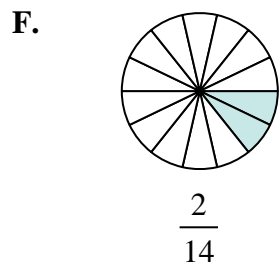
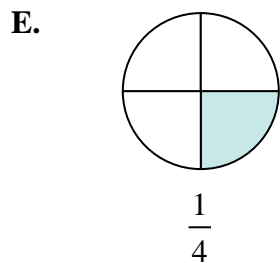
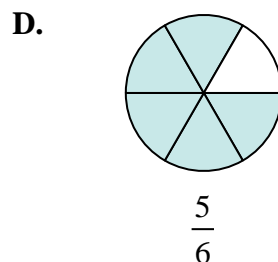
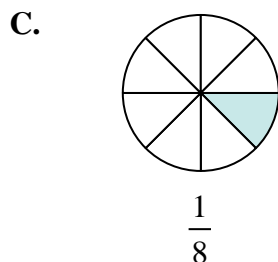
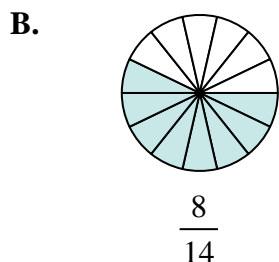
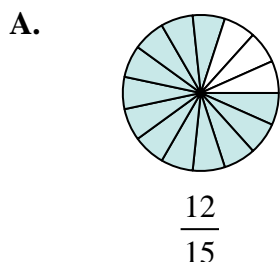
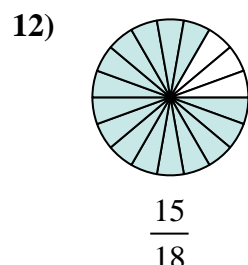
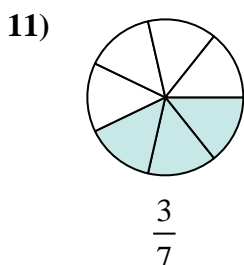
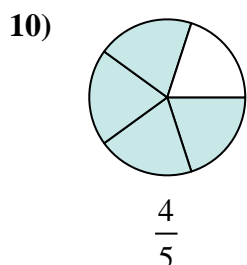
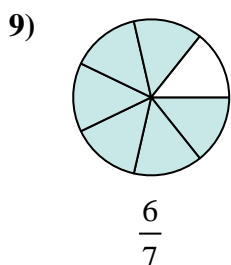
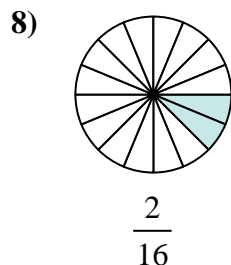
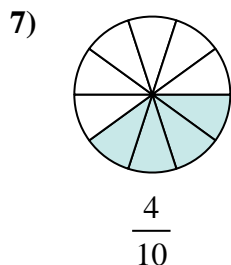
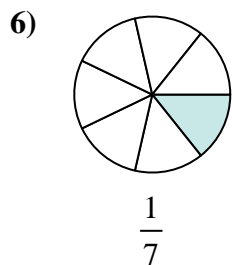
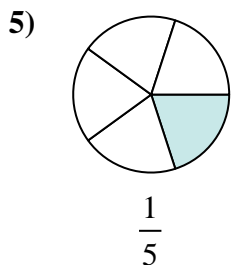
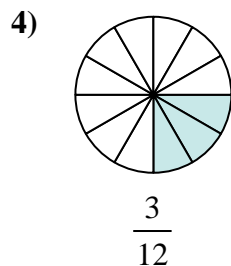
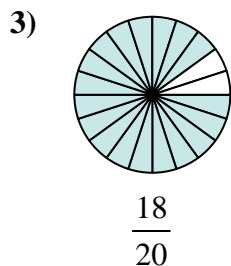
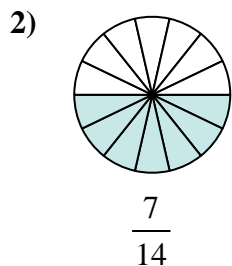
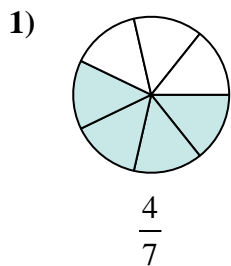
**Answers**



1. \_\_\_\_\_
2. \_\_\_\_\_
3. \_\_\_\_\_
4. \_\_\_\_\_
5. \_\_\_\_\_
6. \_\_\_\_\_
7. \_\_\_\_\_
8. \_\_\_\_\_
9. \_\_\_\_\_
10. \_\_\_\_\_
11. \_\_\_\_\_
12. \_\_\_\_\_



Determine which letter best represents an equivalent fraction.



**Answers**

1. **B**

2. **I**

3. **H**

4. **E**

5. **K**

6. **F**

7. **J**

8. **C**

9. **G**

10. **A**

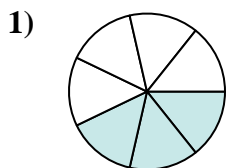
11. **L**

12. **D**

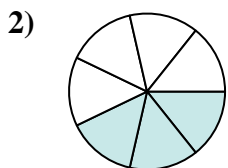


Determine which letter best represents an equivalent fraction.

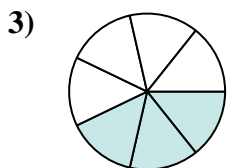
**Answers**



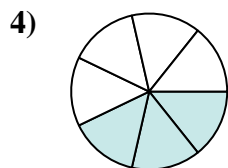
$$\frac{3 \times 2}{7 \times 2}$$



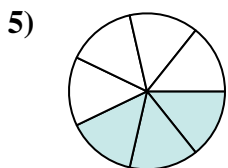
$$\frac{3 \times 2}{7 \times 2}$$



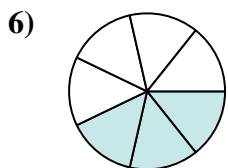
$$\frac{3 \times 2}{7 \times 2}$$



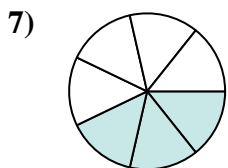
$$\frac{3 \times 2}{7 \times 2}$$



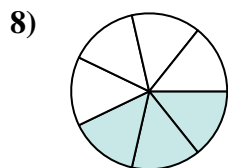
$$\frac{3 \times 2}{7 \times 2}$$



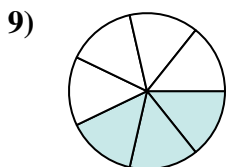
$$\frac{3 \times 2}{7 \times 2}$$



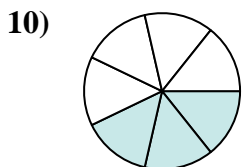
$$\frac{3 \times 2}{7 \times 2}$$



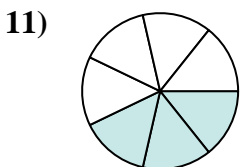
$$\frac{3 \times 2}{7 \times 2}$$



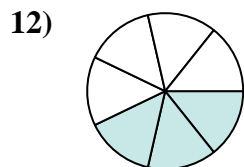
$$\frac{3 \times 2}{7 \times 2}$$



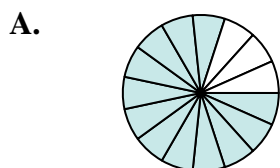
$$\frac{3 \times 2}{7 \times 2}$$



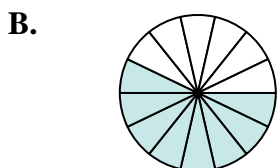
$$\frac{3 \times 2}{7 \times 2}$$




$$\frac{3 \times 2}{7 \times 2}$$



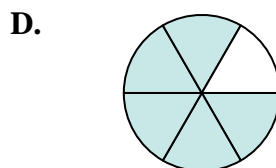
$$\frac{12}{15}$$



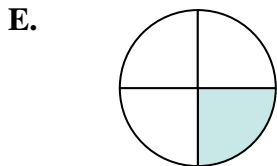
$$\frac{8}{14}$$



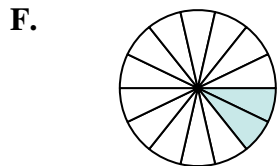
$$\frac{1}{8}$$



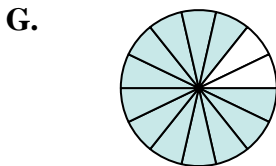
$$\frac{5}{6}$$



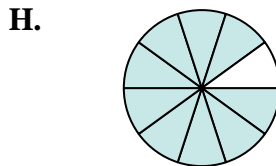
$$\frac{1}{4}$$



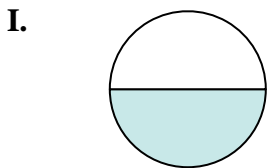
$$\frac{2}{14}$$



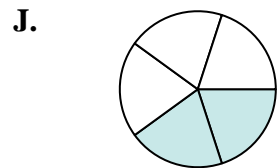
$$\frac{12}{14}$$




$$\frac{9}{10}$$



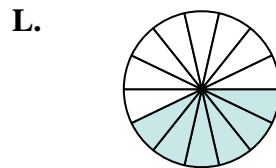
$$\frac{1}{2}$$



$$\frac{2}{5}$$



$$\frac{4}{20}$$



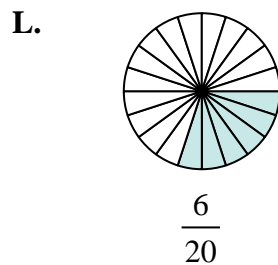
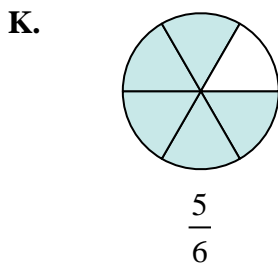
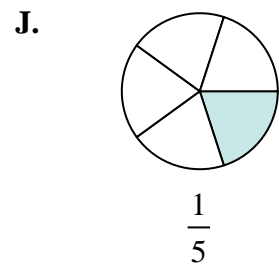
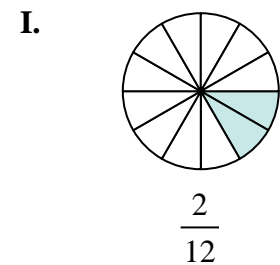
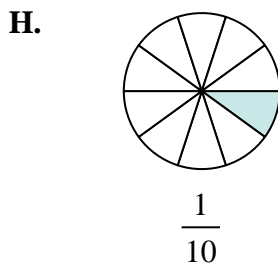
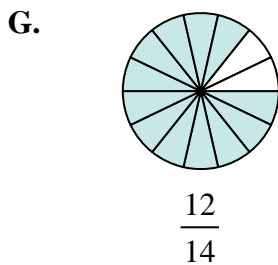
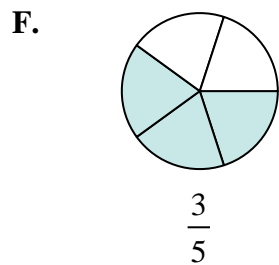
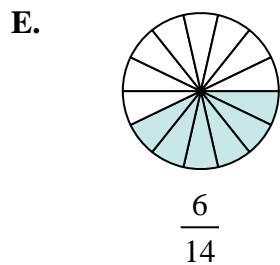
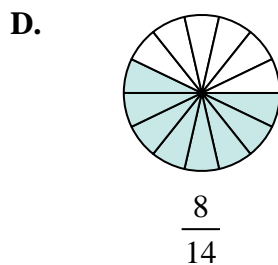
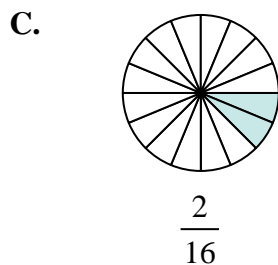
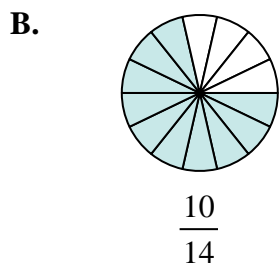
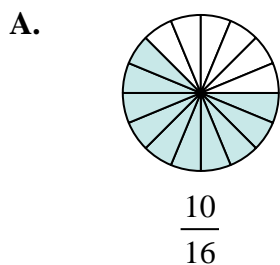
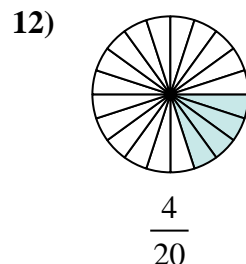
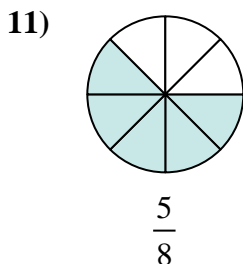
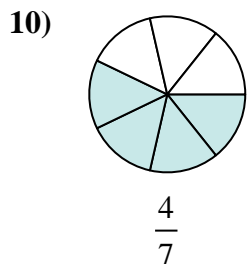
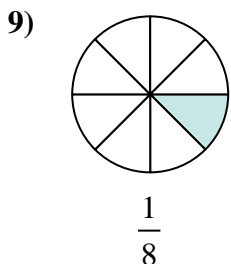
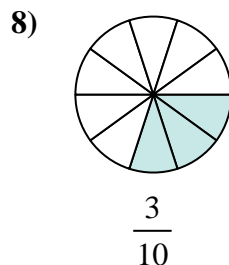
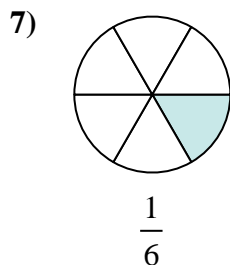
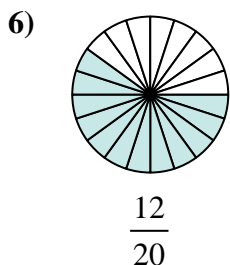
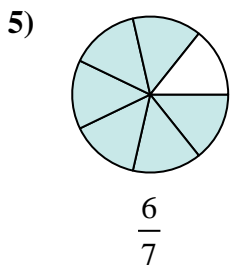
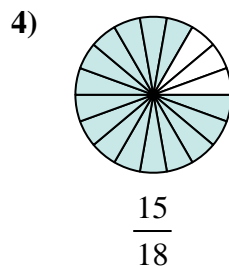
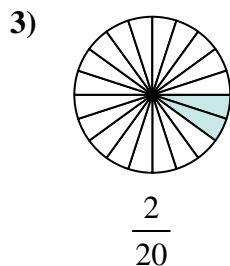
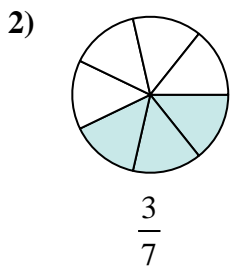
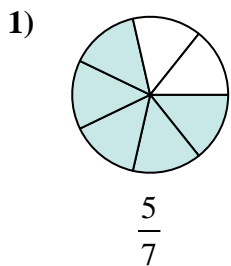
$$\frac{6}{14}$$

1. \_\_\_\_\_
2. \_\_\_\_\_
3. \_\_\_\_\_
4. \_\_\_\_\_
5. \_\_\_\_\_
6. \_\_\_\_\_
7. \_\_\_\_\_
8. \_\_\_\_\_
9. \_\_\_\_\_
10. \_\_\_\_\_
11. \_\_\_\_\_
12. \_\_\_\_\_



Determine which letter best represents an equivalent fraction.

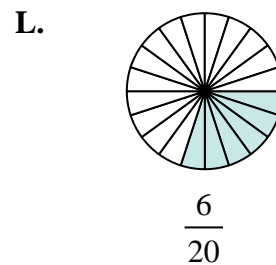
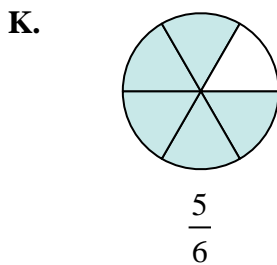
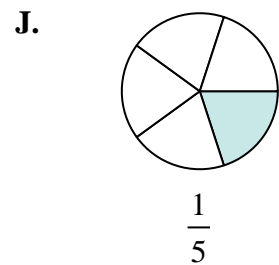
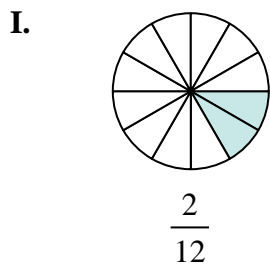
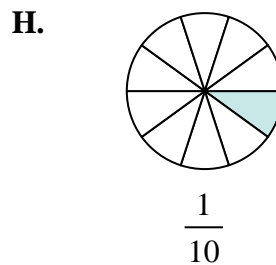
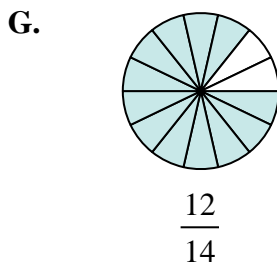
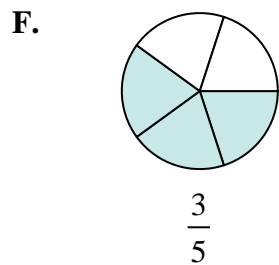
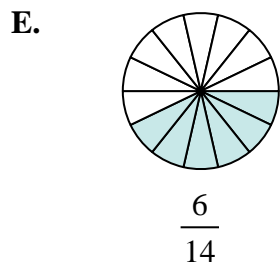
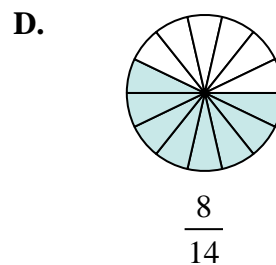
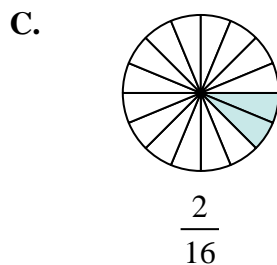
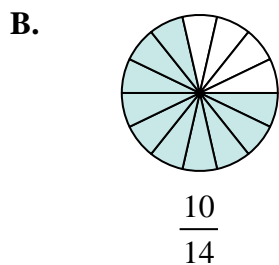
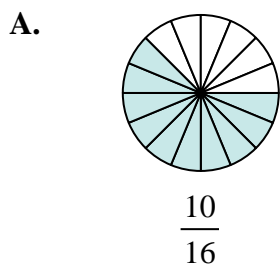
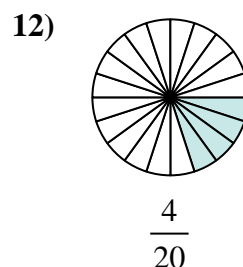
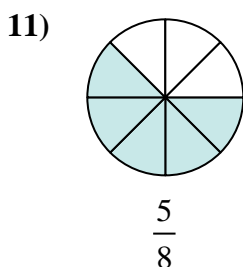
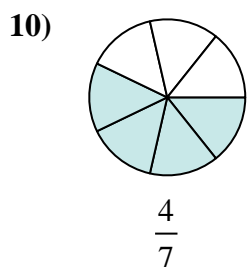
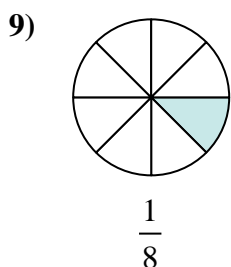
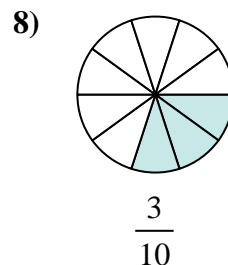
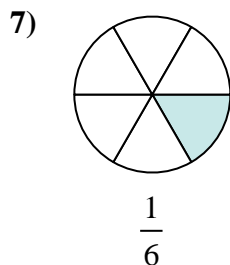
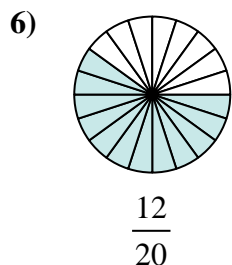
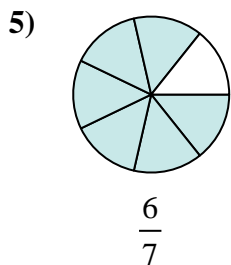
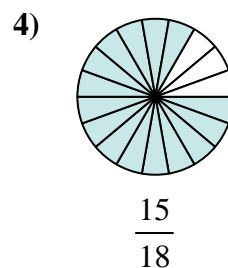
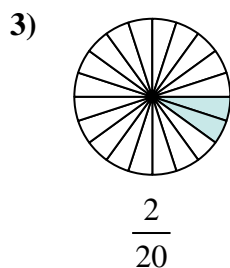
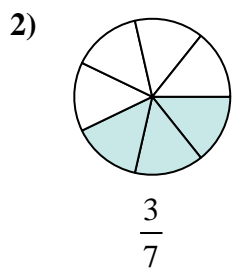
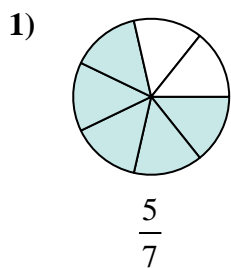
**Answers**



1. \_\_\_\_\_
2. \_\_\_\_\_
3. \_\_\_\_\_
4. \_\_\_\_\_
5. \_\_\_\_\_
6. \_\_\_\_\_
7. \_\_\_\_\_
8. \_\_\_\_\_
9. \_\_\_\_\_
10. \_\_\_\_\_
11. \_\_\_\_\_
12. \_\_\_\_\_



Determine which letter best represents an equivalent fraction.



**Answers**

1. **B**

2. **E**

3. **H**

4. **K**

5. **G**

6. **F**

7. **I**

8. **L**

9. **C**

10. **D**

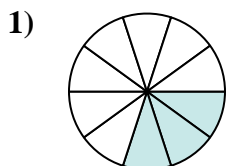
11. **A**

12. **J**

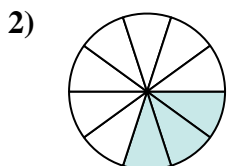


Determine which letter best represents an equivalent fraction.

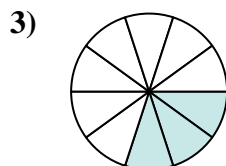
**Answers**



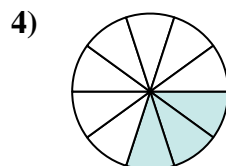
$$\frac{3 \times 2}{10 \times 2}$$



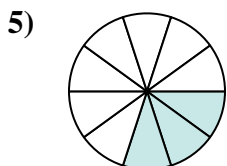
$$\frac{3 \times 2}{10 \times 2}$$



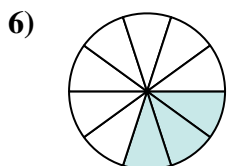
$$\frac{3 \times 2}{10 \times 2}$$



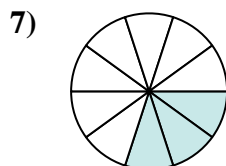
$$\frac{3 \times 2}{10 \times 2}$$



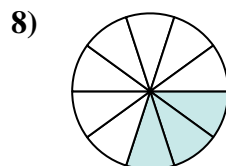
$$\frac{3 \times 2}{10 \times 2}$$



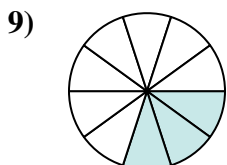
$$\frac{3 \times 2}{10 \times 2}$$



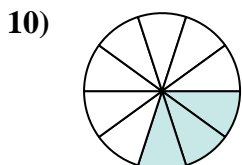
$$\frac{3 \times 2}{10 \times 2}$$



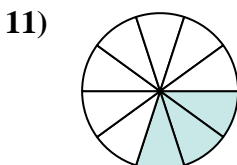
$$\frac{3 \times 2}{10 \times 2}$$



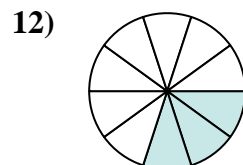
$$\frac{3 \times 2}{10 \times 2}$$



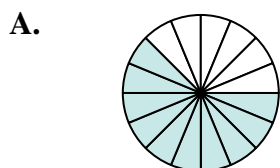
$$\frac{3 \times 2}{10 \times 2}$$



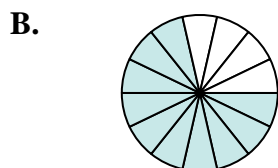
$$\frac{3 \times 2}{10 \times 2}$$



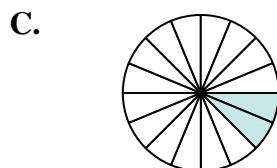
$$\frac{3 \times 2}{10 \times 2}$$



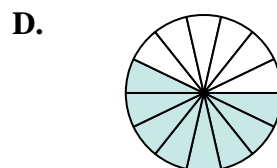
$$\frac{10}{16}$$



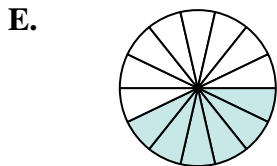
$$\frac{10}{14}$$



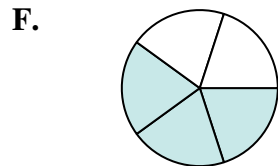
$$\frac{2}{16}$$



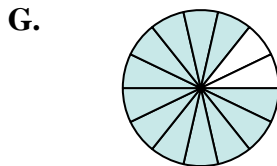
$$\frac{8}{14}$$



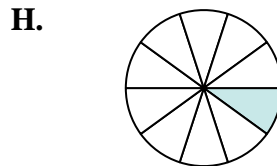
$$\frac{6}{14}$$



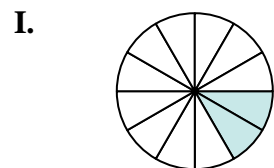
$$\frac{3}{5}$$



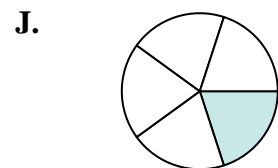
$$\frac{12}{14}$$



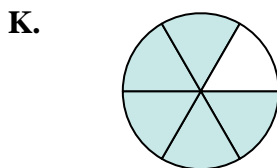
$$\frac{1}{10}$$




$$\frac{2}{12}$$



$$\frac{1}{5}$$



$$\frac{5}{6}$$



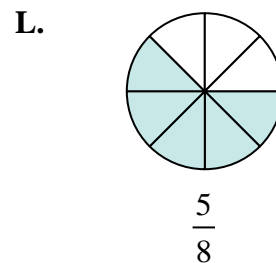
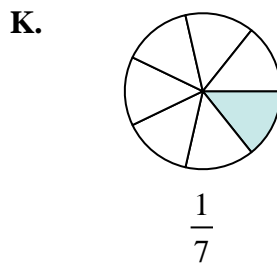
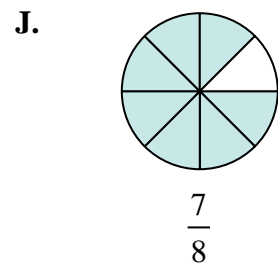
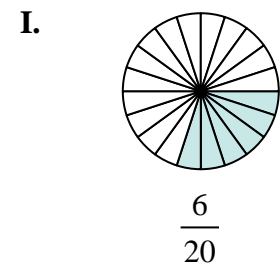
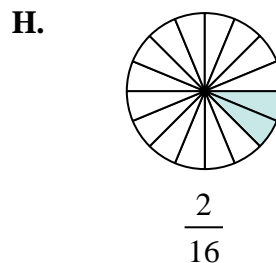
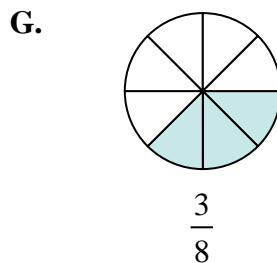
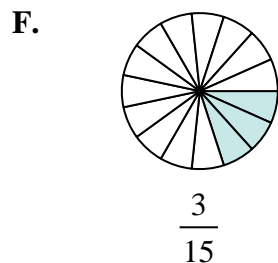
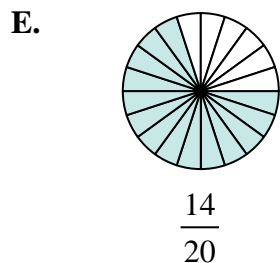
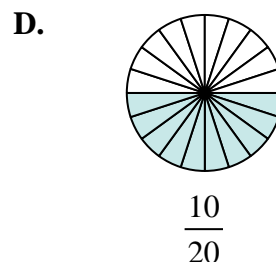
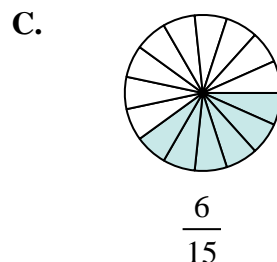
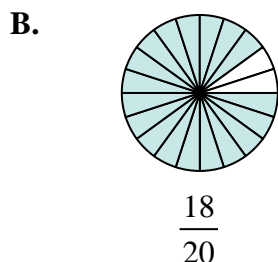
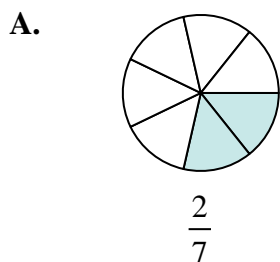
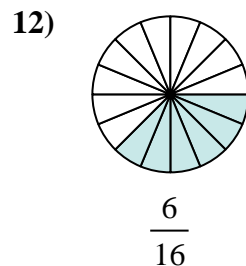
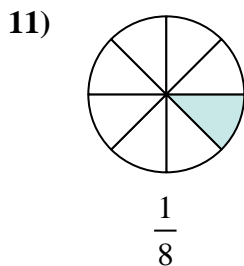
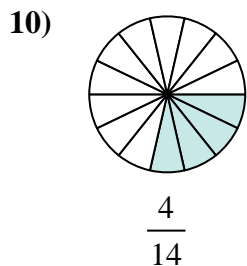
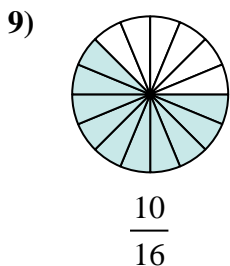
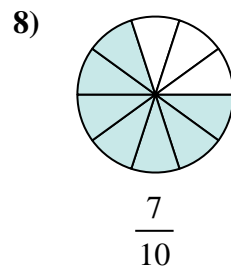
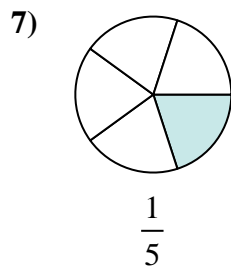
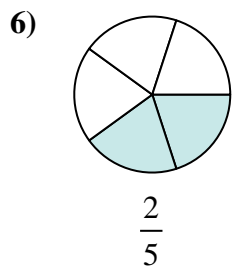
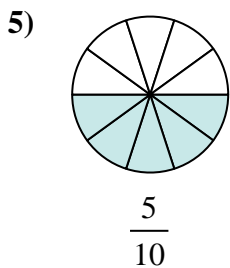
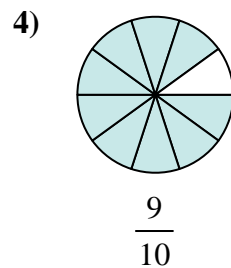
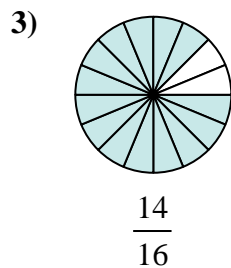
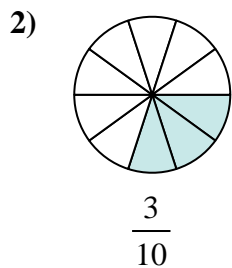
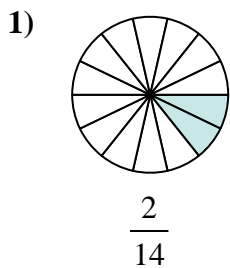
$$\frac{6}{20}$$

1. \_\_\_\_\_
2. \_\_\_\_\_
3. \_\_\_\_\_
4. \_\_\_\_\_
5. \_\_\_\_\_
6. \_\_\_\_\_
7. \_\_\_\_\_
8. \_\_\_\_\_
9. \_\_\_\_\_
10. \_\_\_\_\_
11. \_\_\_\_\_
12. \_\_\_\_\_



Determine which letter best represents an equivalent fraction.

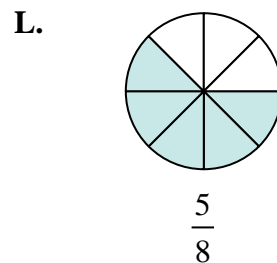
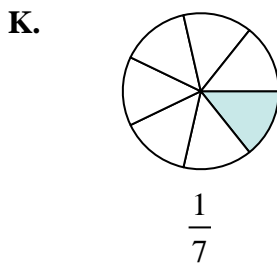
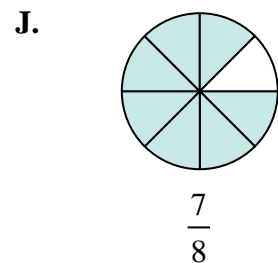
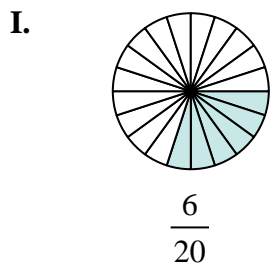
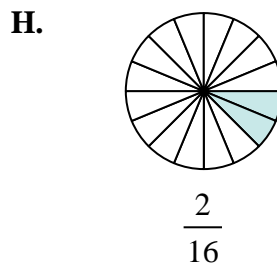
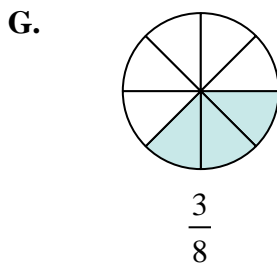
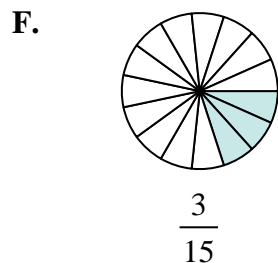
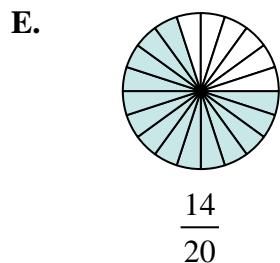
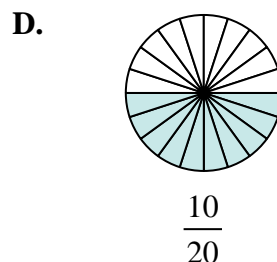
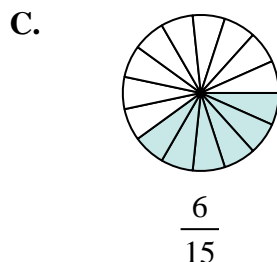
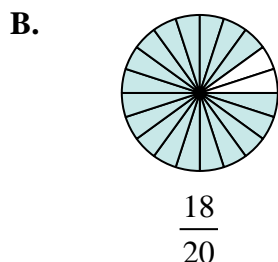
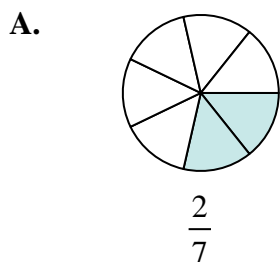
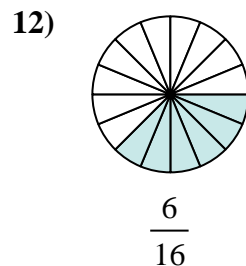
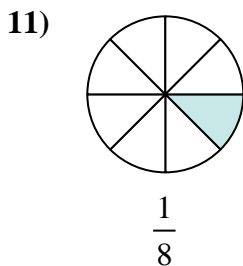
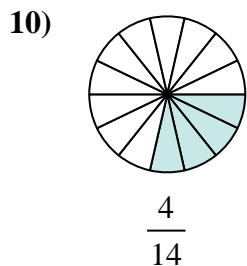
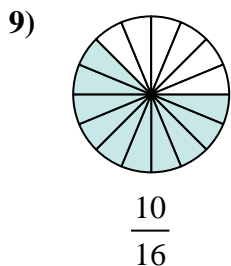
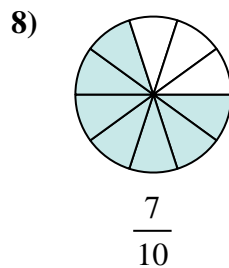
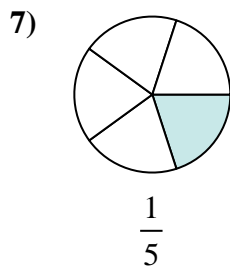
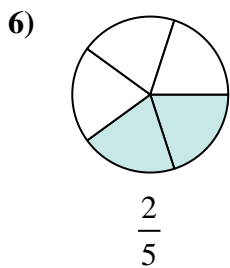
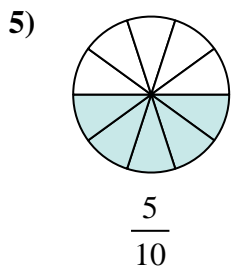
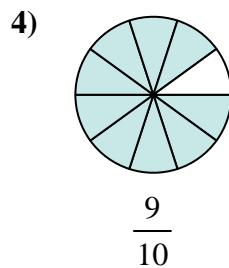
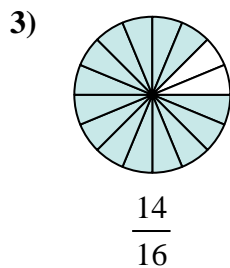
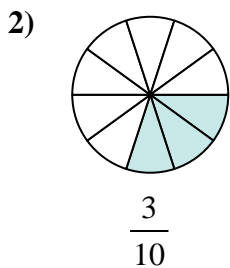
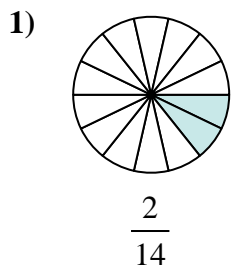
**Answers**



1. \_\_\_\_\_
2. \_\_\_\_\_
3. \_\_\_\_\_
4. \_\_\_\_\_
5. \_\_\_\_\_
6. \_\_\_\_\_
7. \_\_\_\_\_
8. \_\_\_\_\_
9. \_\_\_\_\_
10. \_\_\_\_\_
11. \_\_\_\_\_
12. \_\_\_\_\_



Determine which letter best represents an equivalent fraction.



**Answers**

1.     **K**    

2.     **I**    

3.     **J**    

4.     **B**    

5.     **D**    

6.     **C**    

7.     **F**    

8.     **E**    

9.     **L**    

10.     **A**    

11.     **H**    

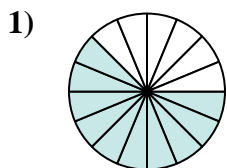
12.     **G**



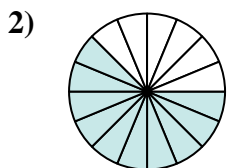


Determine which letter best represents an equivalent fraction.

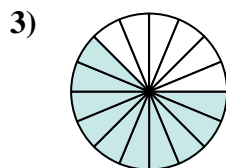
**Answers**



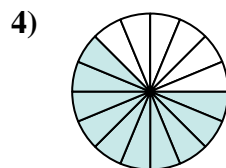
$$\frac{10 \times 2}{16 \times 2}$$



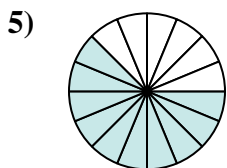
$$\frac{10 \times 2}{16 \times 2}$$



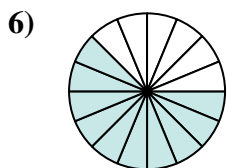
$$\frac{10 \times 2}{16 \times 2}$$



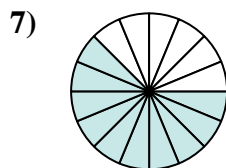
$$\frac{10 \times 2}{16 \times 2}$$



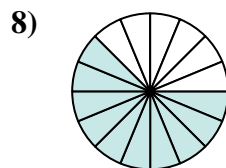
$$\frac{10 \times 2}{16 \times 2}$$



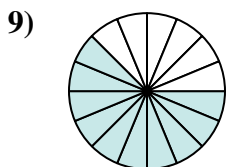
$$\frac{10 \times 2}{16 \times 2}$$



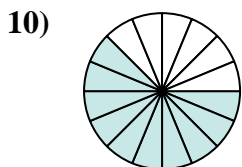
$$\frac{10 \times 2}{16 \times 2}$$



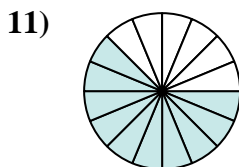
$$\frac{10 \times 2}{16 \times 2}$$



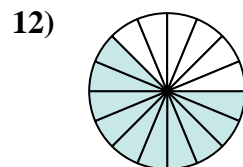
$$\frac{10 \times 2}{16 \times 2}$$



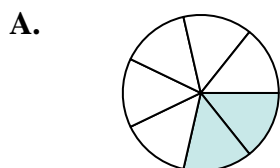
$$\frac{10 \times 2}{16 \times 2}$$



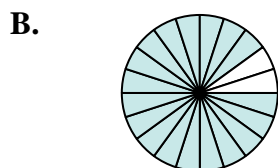
$$\frac{10 \times 2}{16 \times 2}$$



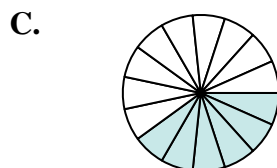
$$\frac{10 \times 2}{16 \times 2}$$



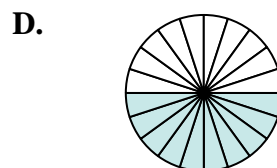
$$\frac{2}{7}$$



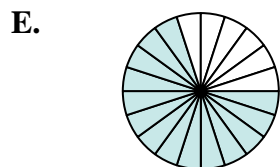
$$\frac{18}{20}$$



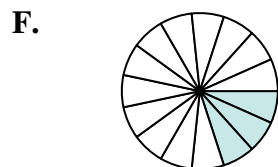
$$\frac{6}{15}$$



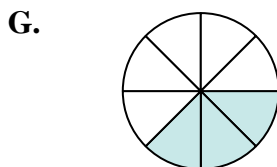
$$\frac{10}{20}$$



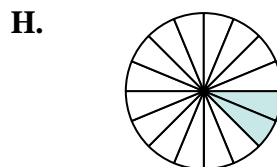
$$\frac{14}{20}$$



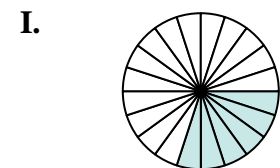
$$\frac{3}{15}$$



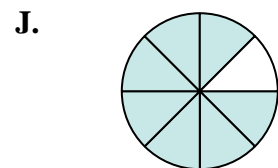
$$\frac{3}{8}$$



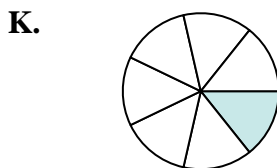
$$\frac{2}{16}$$



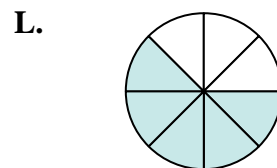
$$\frac{6}{20}$$



$$\frac{7}{8}$$



$$\frac{1}{7}$$



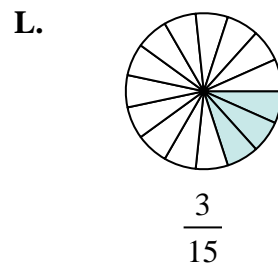
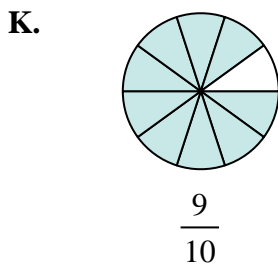
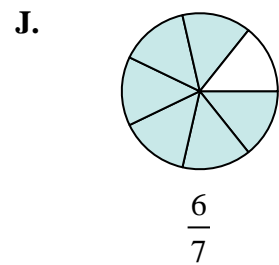
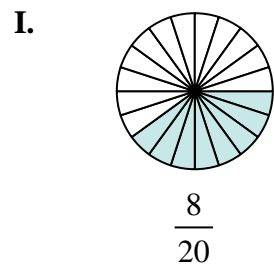
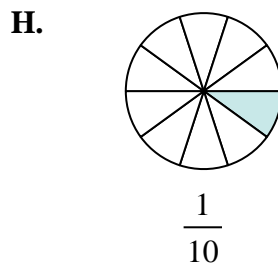
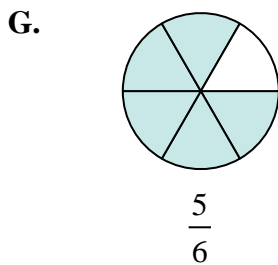
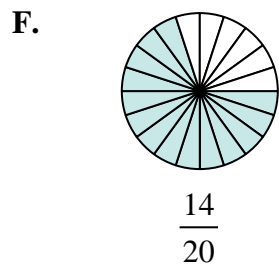
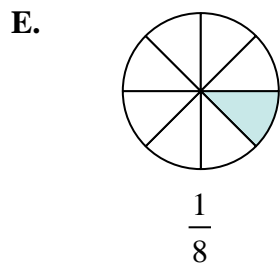
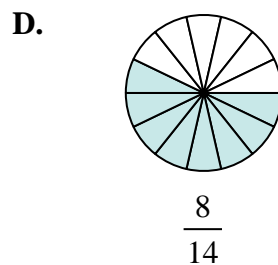
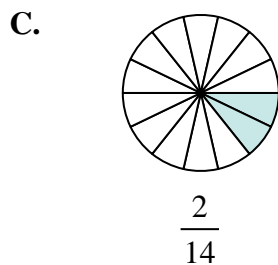
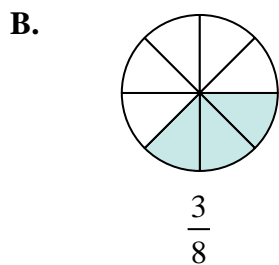
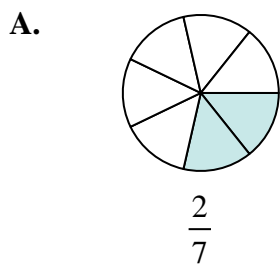
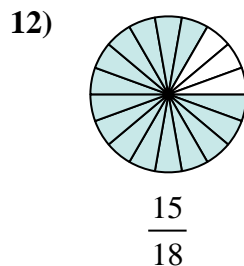
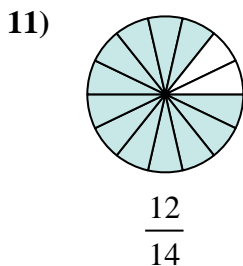
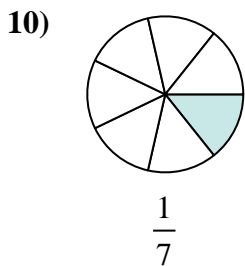
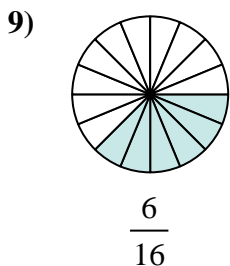
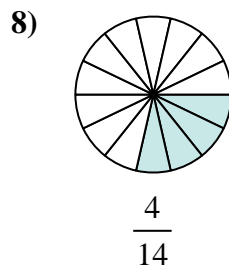
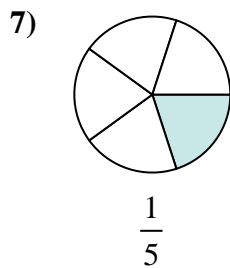
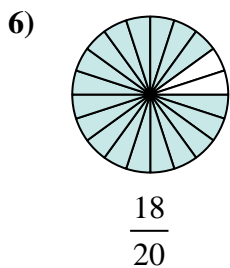
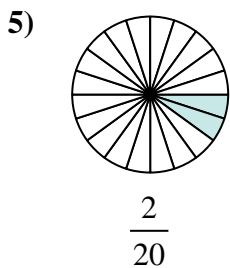
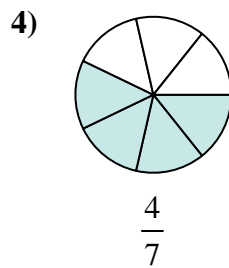
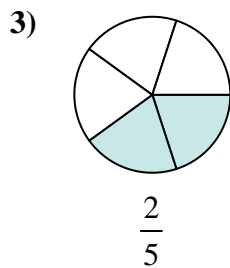
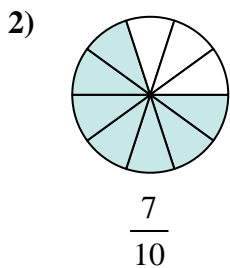
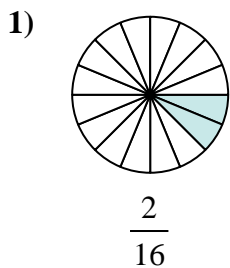
$$\frac{5}{8}$$

1. \_\_\_\_\_
2. \_\_\_\_\_
3. \_\_\_\_\_
4. \_\_\_\_\_
5. \_\_\_\_\_
6. \_\_\_\_\_
7. \_\_\_\_\_
8. \_\_\_\_\_
9. \_\_\_\_\_
10. \_\_\_\_\_
11. \_\_\_\_\_
12. \_\_\_\_\_



Determine which letter best represents an equivalent fraction.

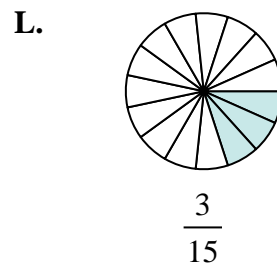
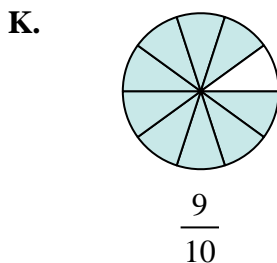
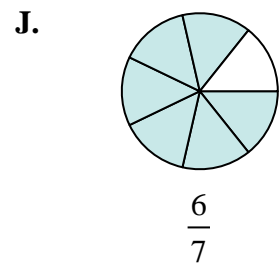
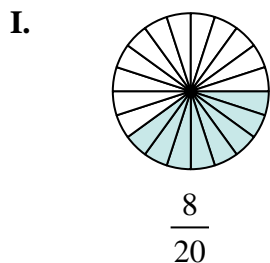
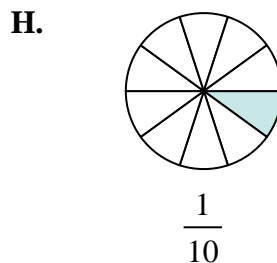
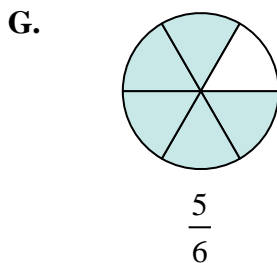
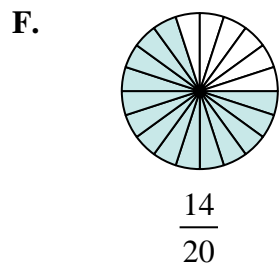
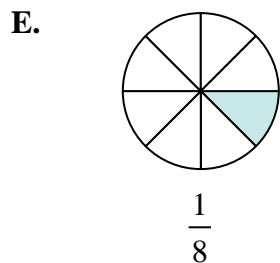
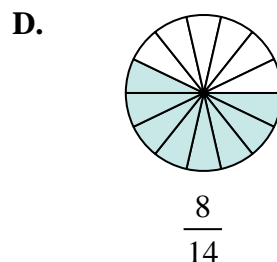
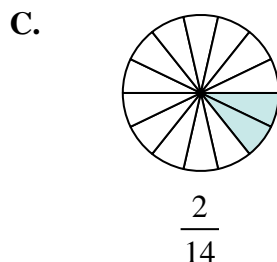
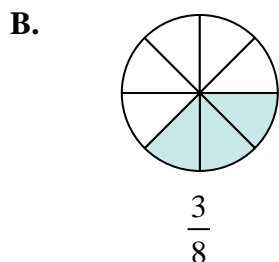
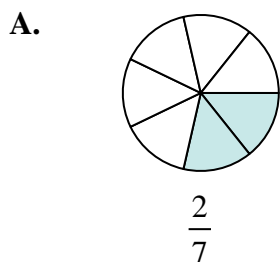
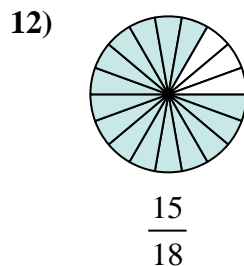
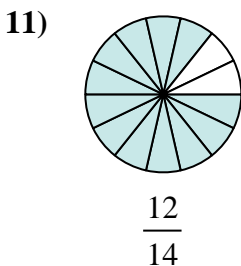
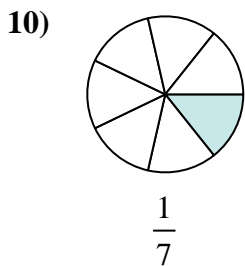
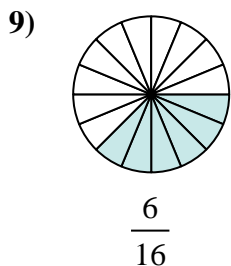
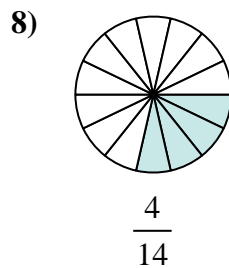
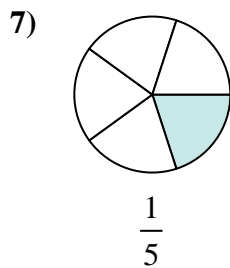
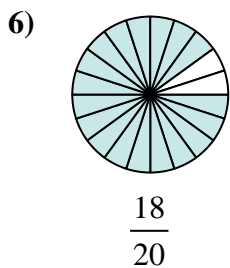
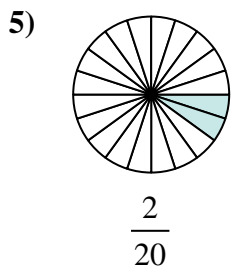
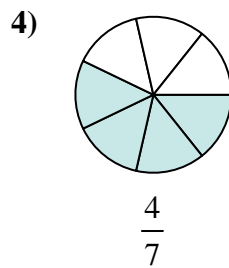
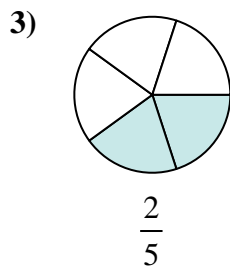
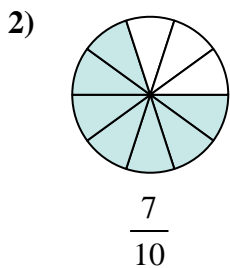
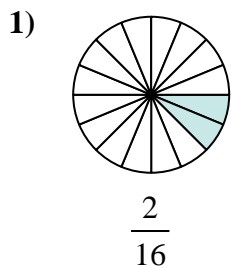
**Answers**



1. \_\_\_\_\_
2. \_\_\_\_\_
3. \_\_\_\_\_
4. \_\_\_\_\_
5. \_\_\_\_\_
6. \_\_\_\_\_
7. \_\_\_\_\_
8. \_\_\_\_\_
9. \_\_\_\_\_
10. \_\_\_\_\_
11. \_\_\_\_\_
12. \_\_\_\_\_



Determine which letter best represents an equivalent fraction.



**Answers**

1. **E**

2. **F**

3. **I**

4. **D**

5. **H**

6. **K**

7. **L**

8. **A**

9. **B**

10. **C**

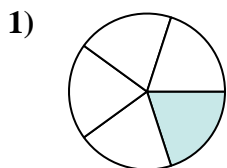
11. **J**

12. **G**

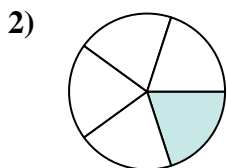


Determine which letter best represents an equivalent fraction.

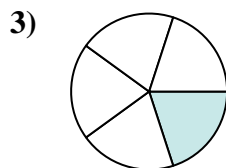
**Answers**



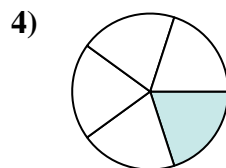
$$\frac{1 \times 3}{5 \times 3}$$



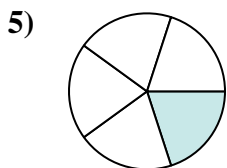
$$\frac{1 \times 3}{5 \times 3}$$



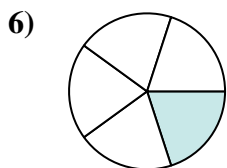
$$\frac{1 \times 3}{5 \times 3}$$



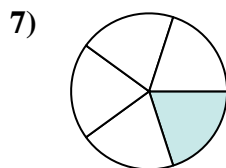
$$\frac{1 \times 3}{5 \times 3}$$



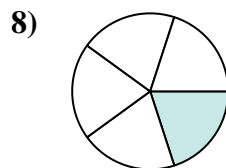
$$\frac{1 \times 3}{5 \times 3}$$



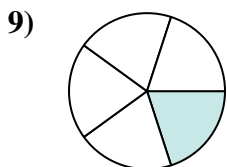
$$\frac{1 \times 3}{5 \times 3}$$



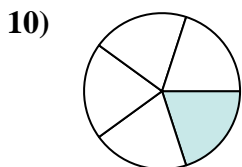
$$\frac{1 \times 3}{5 \times 3}$$



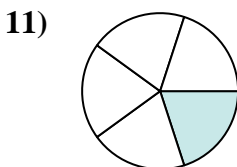
$$\frac{1 \times 3}{5 \times 3}$$



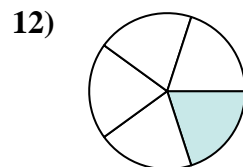
$$\frac{1 \times 3}{5 \times 3}$$



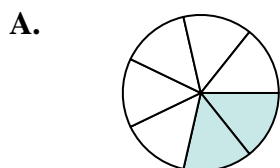
$$\frac{1 \times 3}{5 \times 3}$$



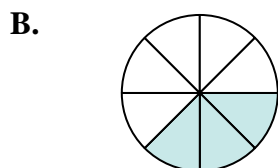
$$\frac{1 \times 3}{5 \times 3}$$



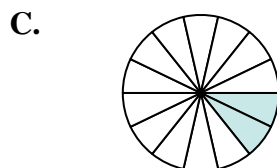
$$\frac{1 \times 3}{5 \times 3}$$



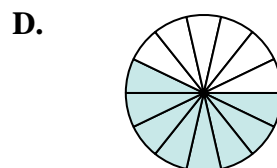
$$\frac{2}{7}$$



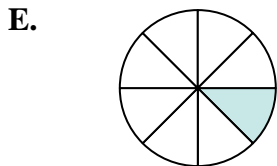
$$\frac{3}{8}$$



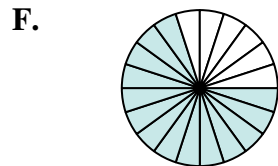
$$\frac{2}{14}$$



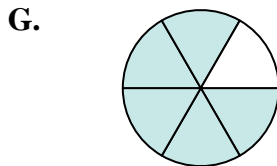
$$\frac{8}{14}$$



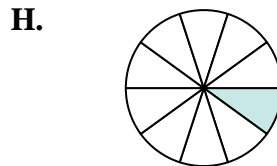
$$\frac{1}{8}$$




$$\frac{14}{20}$$



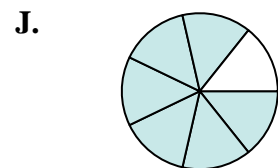
$$\frac{5}{6}$$



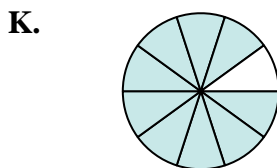
$$\frac{1}{10}$$




$$\frac{8}{20}$$



$$\frac{6}{7}$$



$$\frac{9}{10}$$



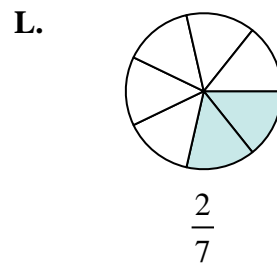
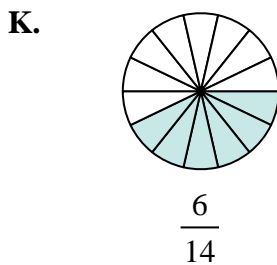
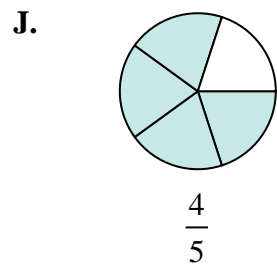
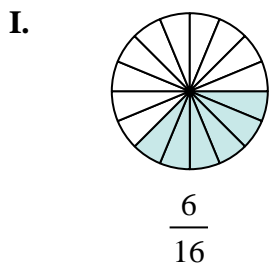
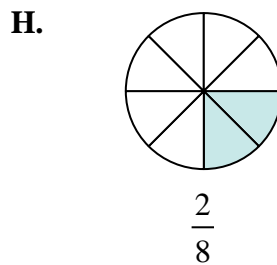
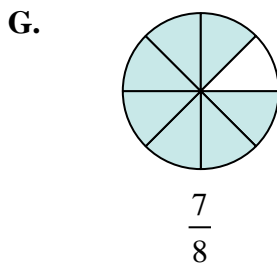
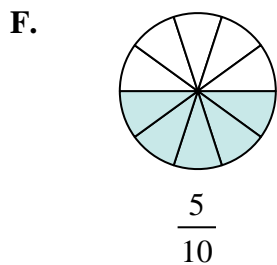
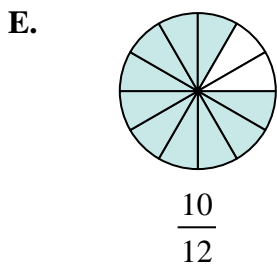
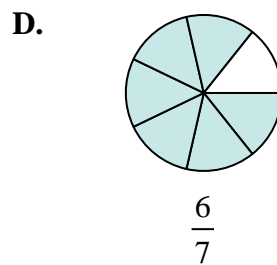
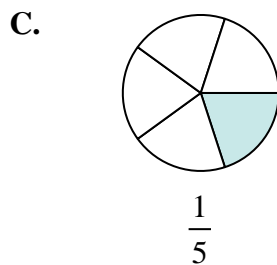
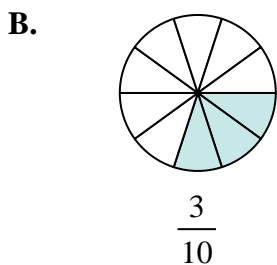
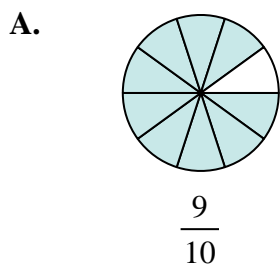
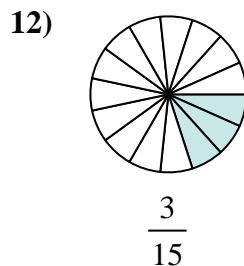
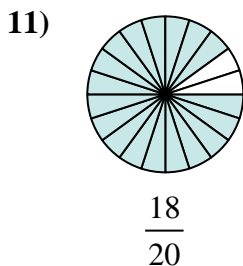
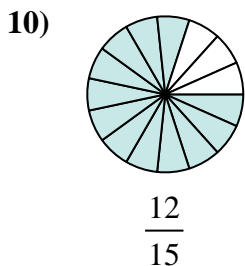
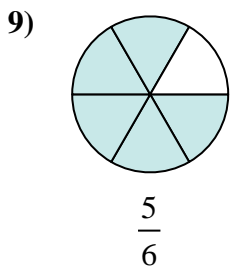
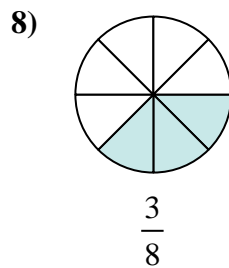
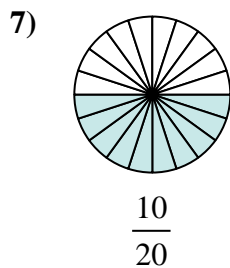
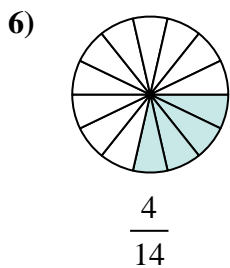
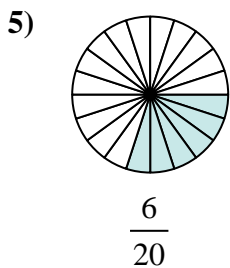
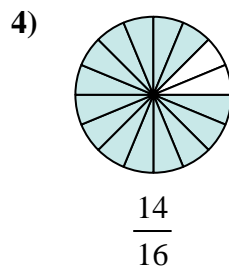
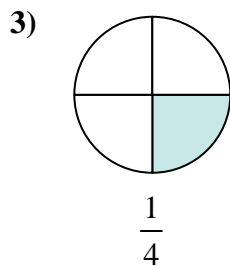
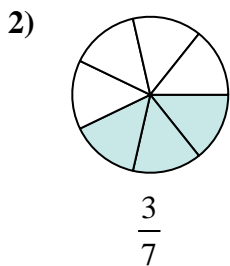
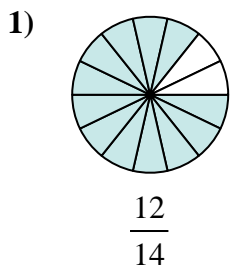
$$\frac{3}{15}$$

1. \_\_\_\_\_
2. \_\_\_\_\_
3. \_\_\_\_\_
4. \_\_\_\_\_
5. \_\_\_\_\_
6. \_\_\_\_\_
7. \_\_\_\_\_
8. \_\_\_\_\_
9. \_\_\_\_\_
10. \_\_\_\_\_
11. \_\_\_\_\_
12. \_\_\_\_\_



Determine which letter best represents an equivalent fraction.

**Answers**

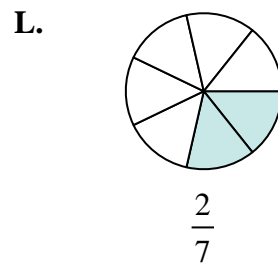
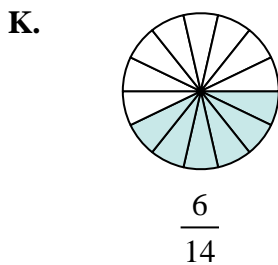
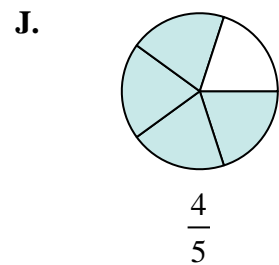
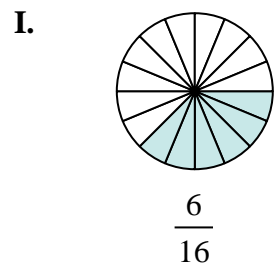
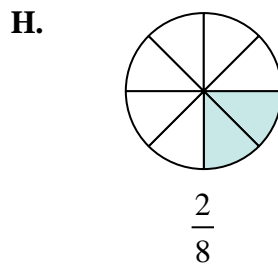
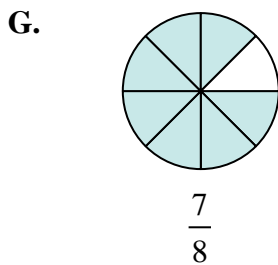
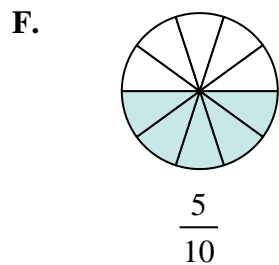
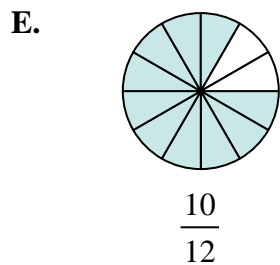
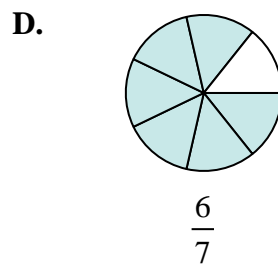
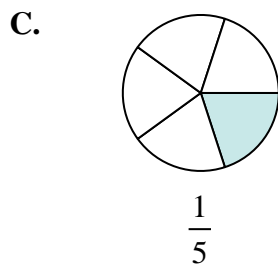
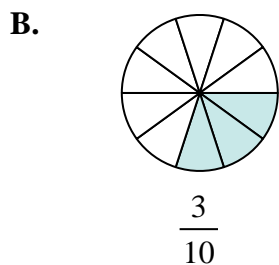
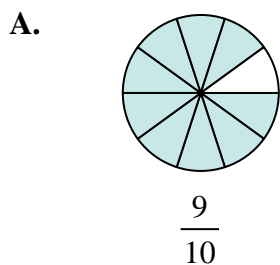
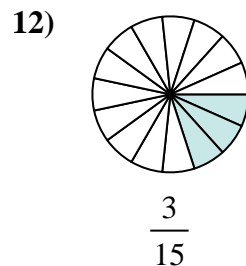
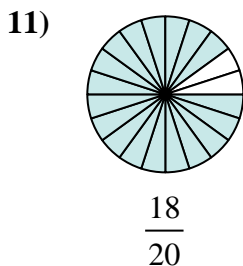
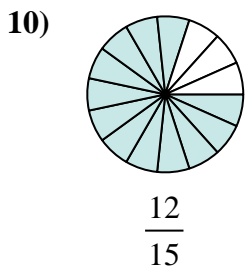
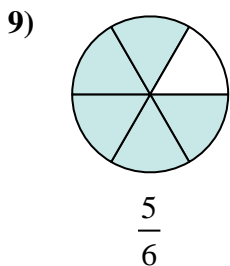
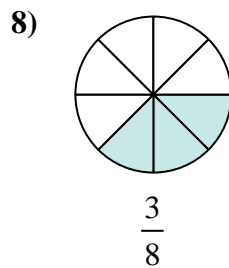
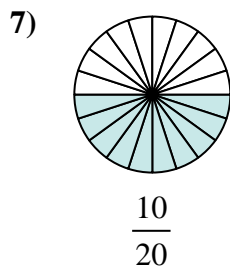
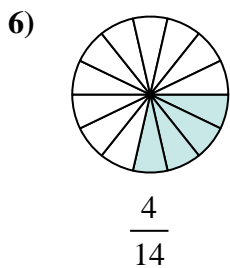
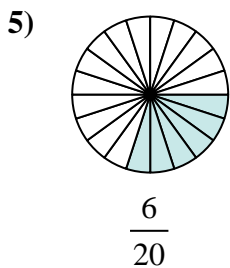
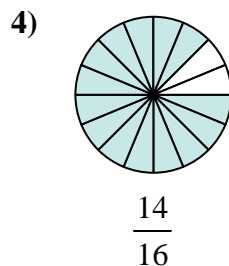
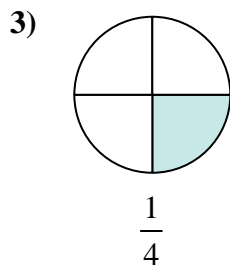
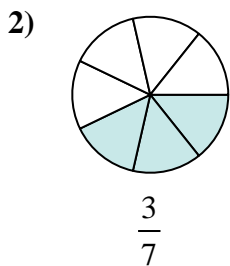
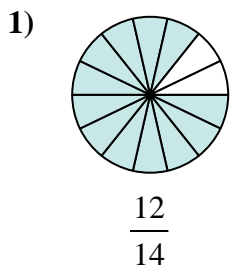


1. \_\_\_\_\_
2. \_\_\_\_\_
3. \_\_\_\_\_
4. \_\_\_\_\_
5. \_\_\_\_\_
6. \_\_\_\_\_
7. \_\_\_\_\_
8. \_\_\_\_\_
9. \_\_\_\_\_
10. \_\_\_\_\_
11. \_\_\_\_\_
12. \_\_\_\_\_



Determine which letter best represents an equivalent fraction.

**Answers**



1. **D**

2. **K**

3. **H**

4. **G**

5. **B**

6. **L**

7. **F**

8. **I**

9. **E**

10. **J**

11. **A**

12. **C**

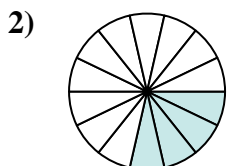


Determine which letter best represents an equivalent fraction.

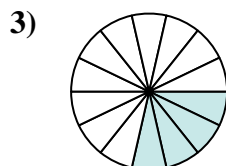
**Answers**



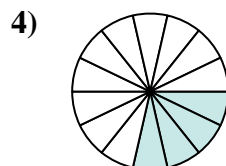
$$\frac{4 \times 2}{14 \times 2}$$



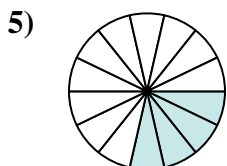
$$\frac{4 \times 2}{14 \times 2}$$



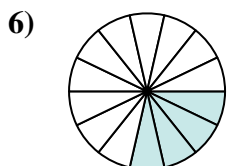
$$\frac{4 \times 2}{14 \times 2}$$



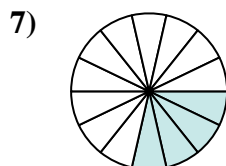
$$\frac{4 \times 2}{14 \times 2}$$



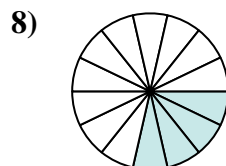
$$\frac{4 \times 2}{14 \times 2}$$



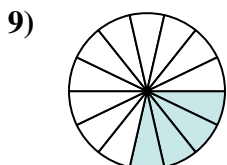
$$\frac{4 \times 2}{14 \times 2}$$



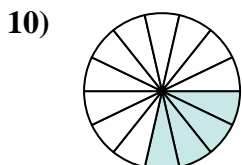
$$\frac{4 \times 2}{14 \times 2}$$



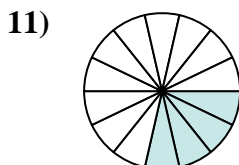
$$\frac{4 \times 2}{14 \times 2}$$



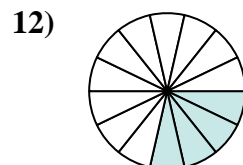
$$\frac{4 \times 2}{14 \times 2}$$



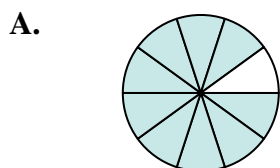
$$\frac{4 \times 2}{14 \times 2}$$



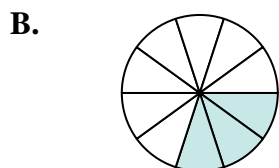
$$\frac{4 \times 2}{14 \times 2}$$



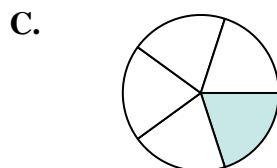
$$\frac{4 \times 2}{14 \times 2}$$



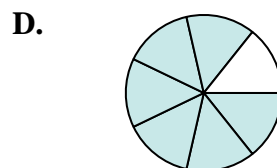
$$\frac{9}{10}$$



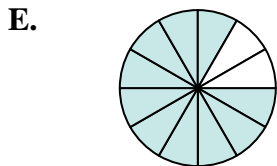
$$\frac{3}{10}$$



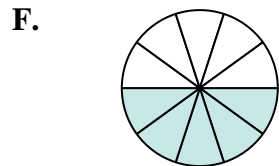
$$\frac{1}{5}$$



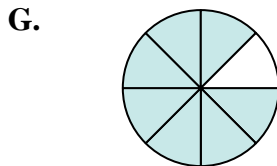
$$\frac{6}{7}$$



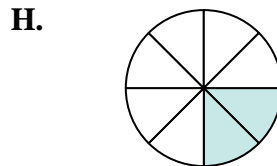
$$\frac{10}{12}$$



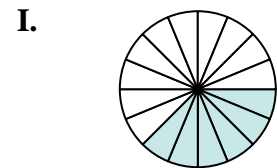
$$\frac{5}{10}$$



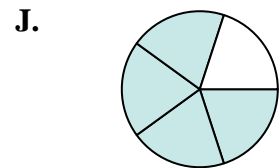
$$\frac{7}{8}$$



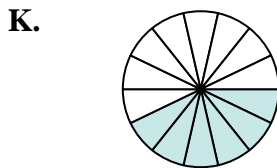
$$\frac{2}{8}$$



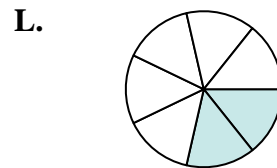
$$\frac{6}{16}$$



$$\frac{4}{5}$$



$$\frac{6}{14}$$



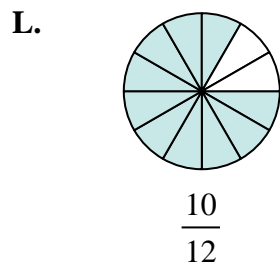
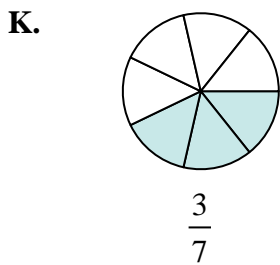
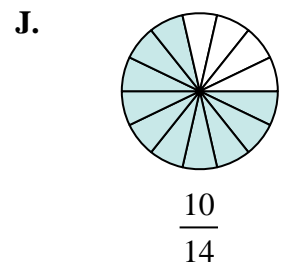
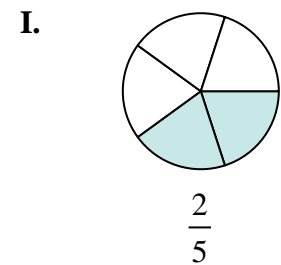
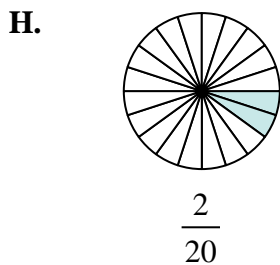
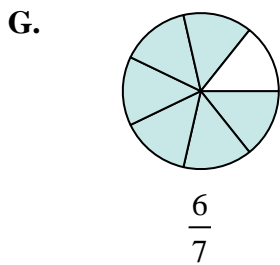
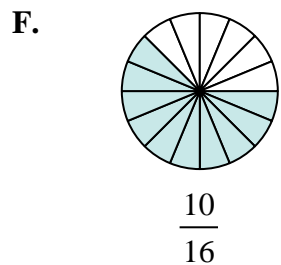
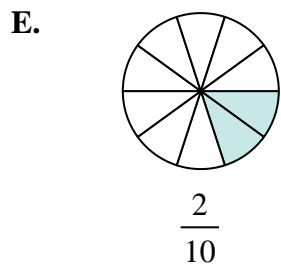
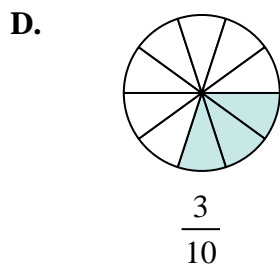
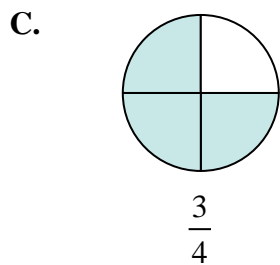
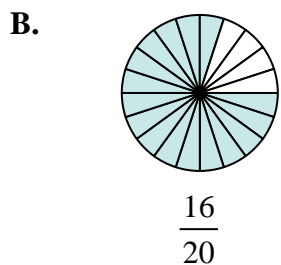
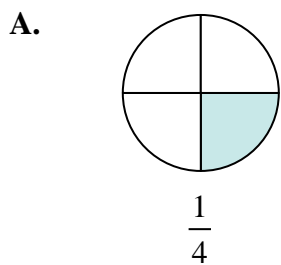
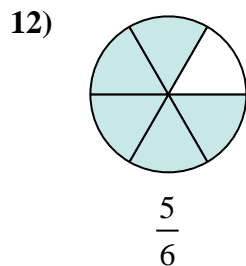
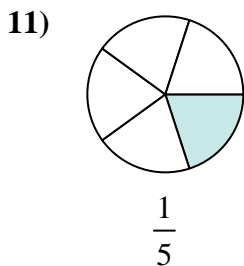
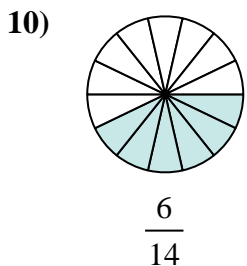
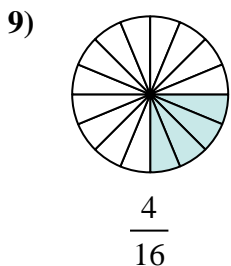
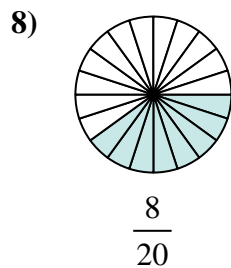
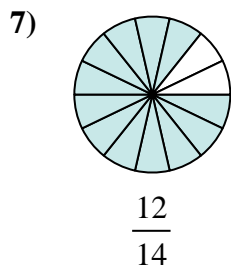
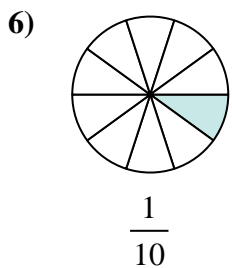
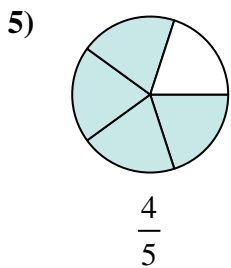
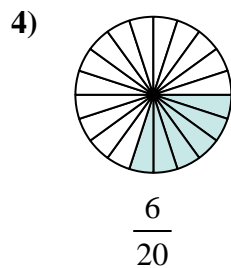
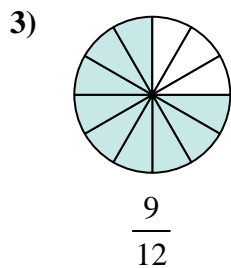
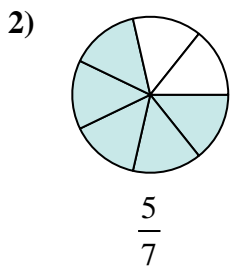
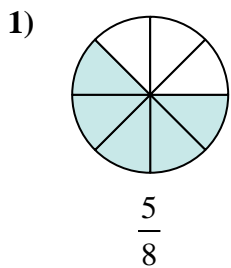
$$\frac{2}{7}$$

1. \_\_\_\_\_
2. \_\_\_\_\_
3. \_\_\_\_\_
4. \_\_\_\_\_
5. \_\_\_\_\_
6. \_\_\_\_\_
7. \_\_\_\_\_
8. \_\_\_\_\_
9. \_\_\_\_\_
10. \_\_\_\_\_
11. \_\_\_\_\_
12. \_\_\_\_\_



Determine which letter best represents an equivalent fraction.

**Answers**

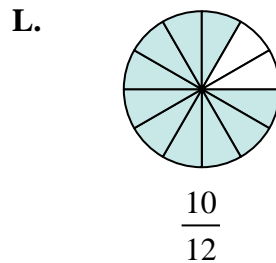
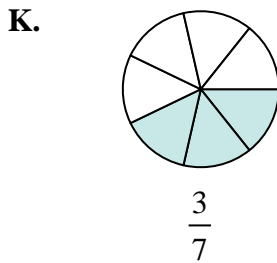
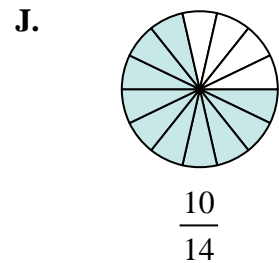
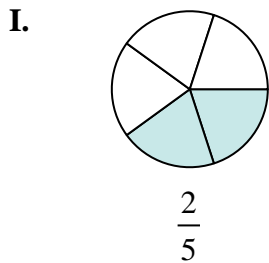
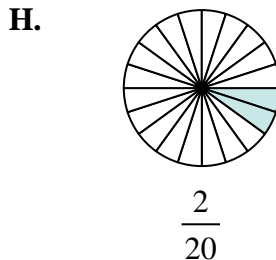
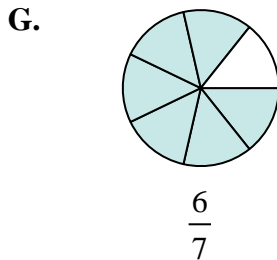
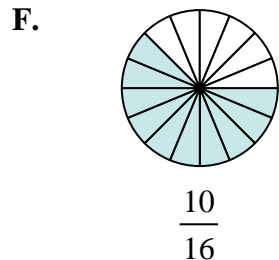
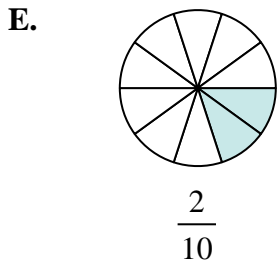
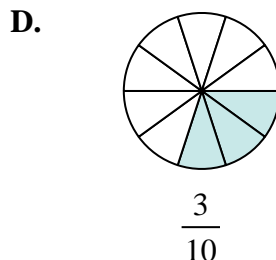
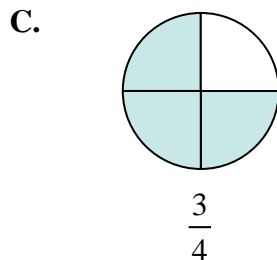
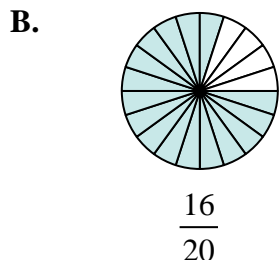
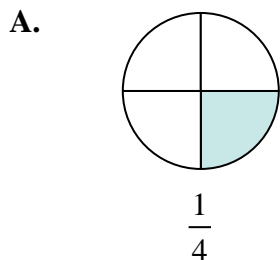
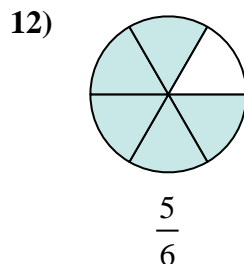
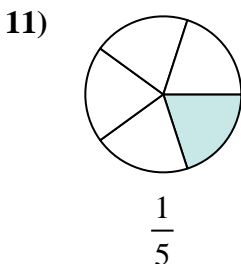
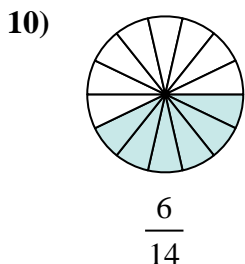
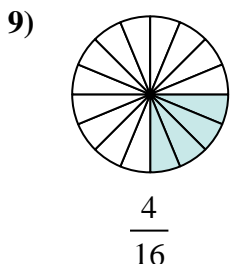
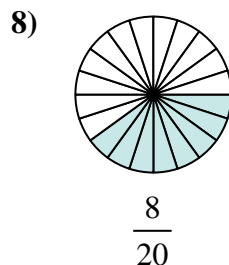
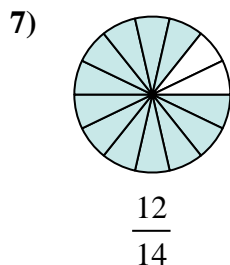
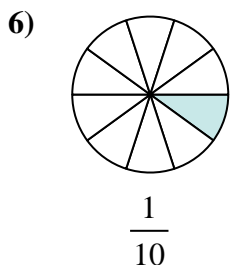
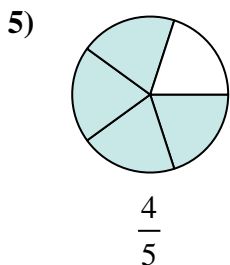
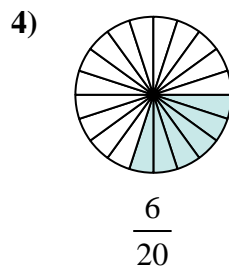
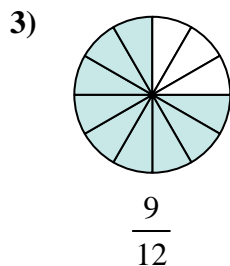
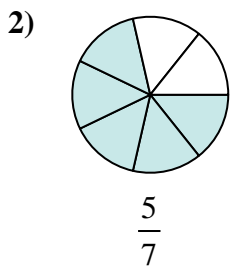
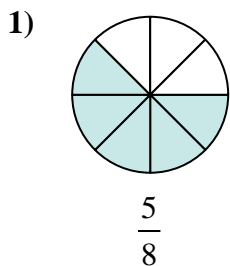


1. \_\_\_\_\_
2. \_\_\_\_\_
3. \_\_\_\_\_
4. \_\_\_\_\_
5. \_\_\_\_\_
6. \_\_\_\_\_
7. \_\_\_\_\_
8. \_\_\_\_\_
9. \_\_\_\_\_
10. \_\_\_\_\_
11. \_\_\_\_\_
12. \_\_\_\_\_





Determine which letter best represents an equivalent fraction.



**Answers**

1. **F**

2. **J**

3. **C**

4. **D**

5. **B**

6. **H**

7. **G**

8. **I**

9. **A**

10. **K**

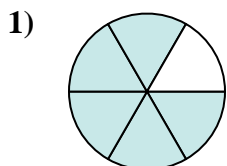
11. **E**

12. **L**

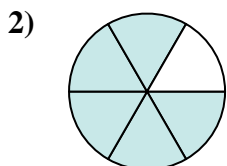


Determine which letter best represents an equivalent fraction.

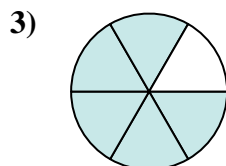
**Answers**



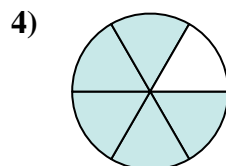
$$\frac{5 \times 2}{6 \times 2}$$



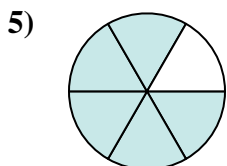
$$\frac{5 \times 2}{6 \times 2}$$



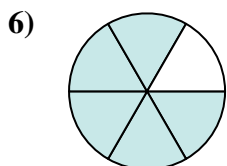
$$\frac{5 \times 2}{6 \times 2}$$



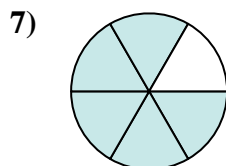
$$\frac{5 \times 2}{6 \times 2}$$



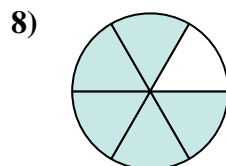
$$\frac{5 \times 2}{6 \times 2}$$



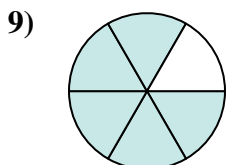
$$\frac{5 \times 2}{6 \times 2}$$



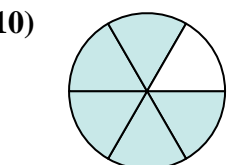
$$\frac{5 \times 2}{6 \times 2}$$



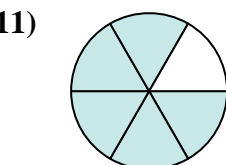
$$\frac{5 \times 2}{6 \times 2}$$



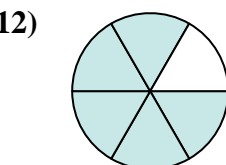
$$\frac{5 \times 2}{6 \times 2}$$



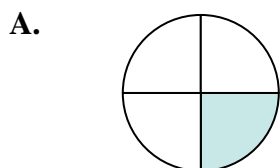
$$\frac{5 \times 2}{6 \times 2}$$



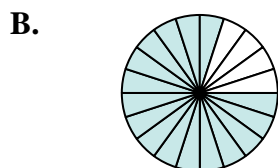
$$\frac{5 \times 2}{6 \times 2}$$



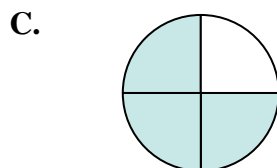
$$\frac{5 \times 2}{6 \times 2}$$



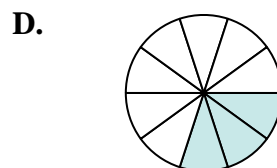
$$\frac{1}{4}$$



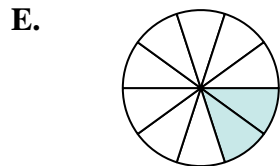
$$\frac{16}{20}$$



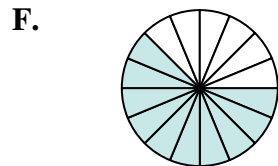
$$\frac{3}{4}$$



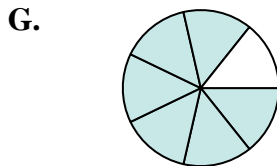
$$\frac{3}{10}$$



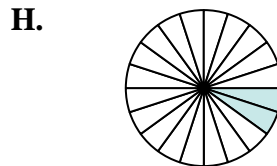
$$\frac{2}{10}$$



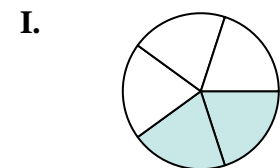
$$\frac{10}{16}$$



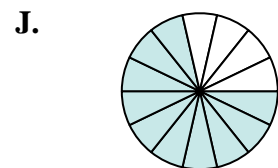
$$\frac{6}{7}$$



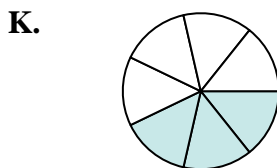
$$\frac{2}{20}$$



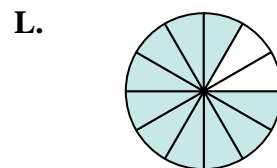
$$\frac{2}{5}$$



$$\frac{10}{14}$$



$$\frac{3}{7}$$



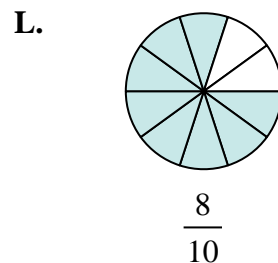
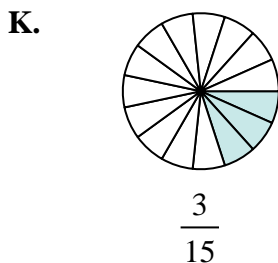
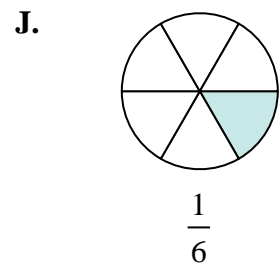
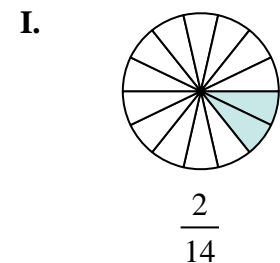
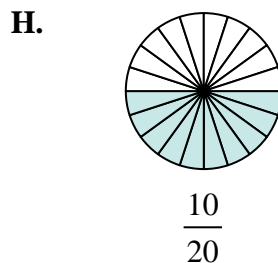
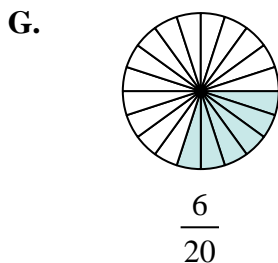
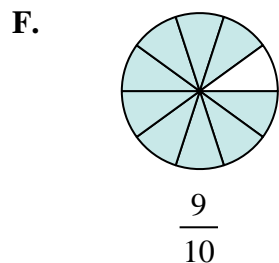
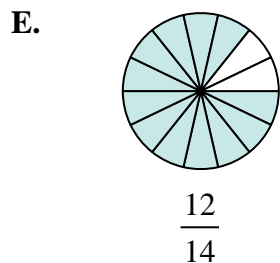
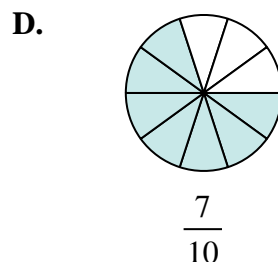
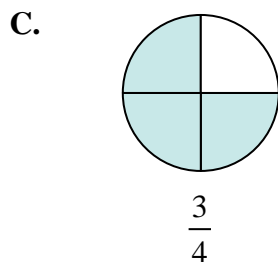
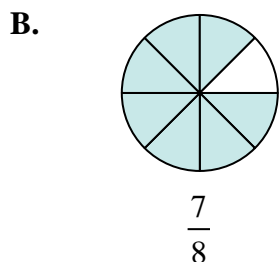
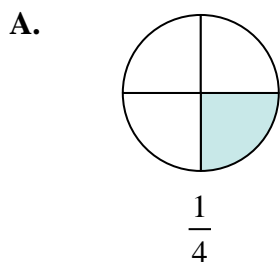
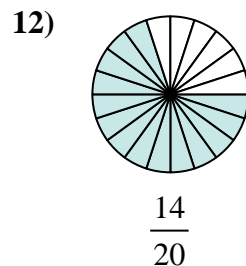
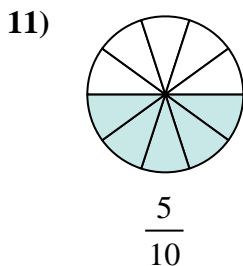
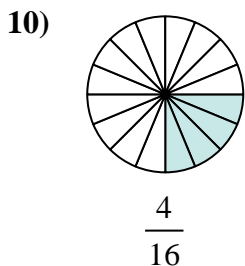
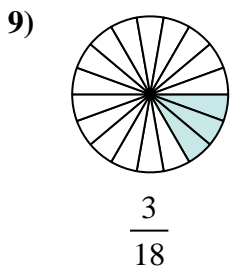
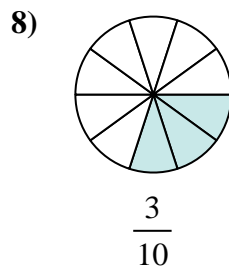
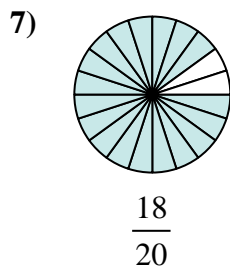
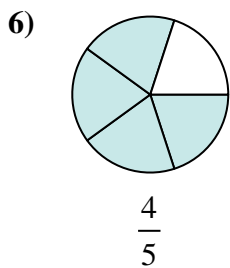
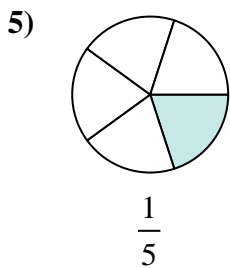
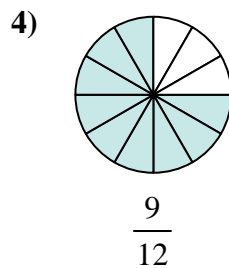
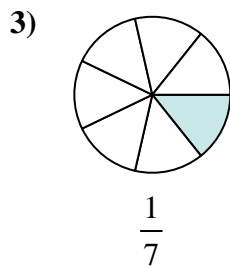
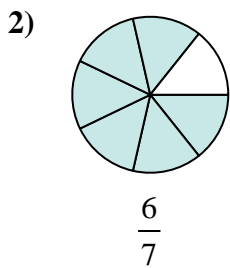
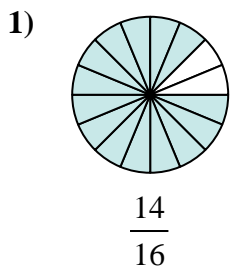
$$\frac{10}{12}$$

1. \_\_\_\_\_
2. \_\_\_\_\_
3. \_\_\_\_\_
4. \_\_\_\_\_
5. \_\_\_\_\_
6. \_\_\_\_\_
7. \_\_\_\_\_
8. \_\_\_\_\_
9. \_\_\_\_\_
10. \_\_\_\_\_
11. \_\_\_\_\_
12. \_\_\_\_\_



Determine which letter best represents an equivalent fraction.

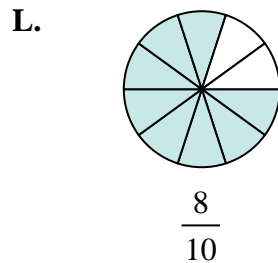
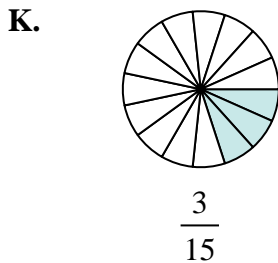
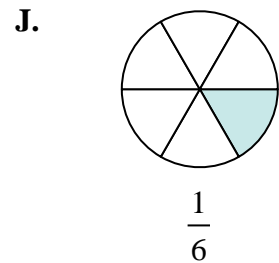
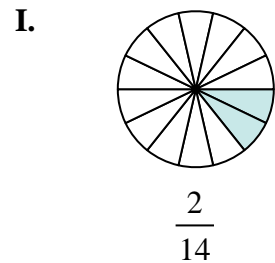
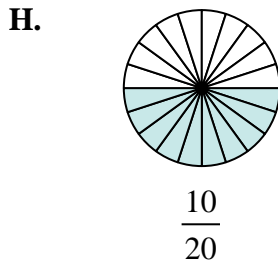
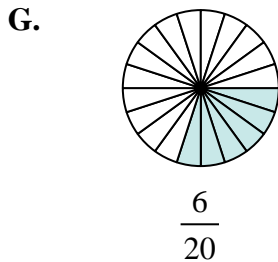
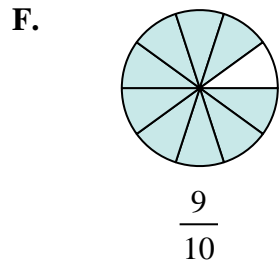
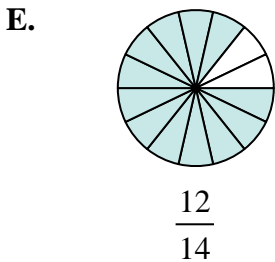
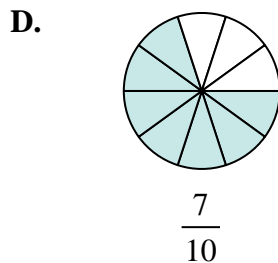
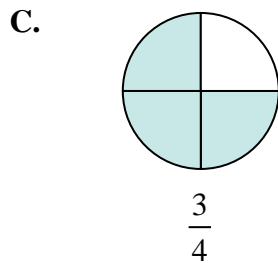
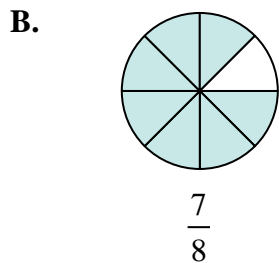
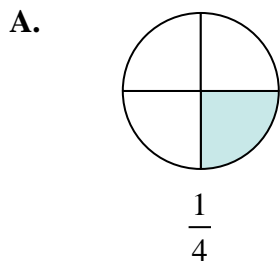
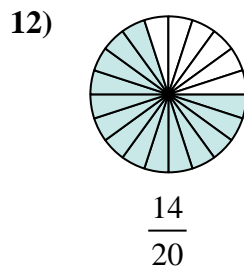
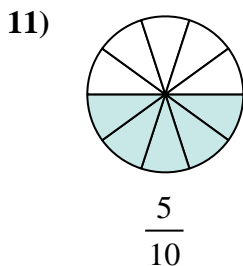
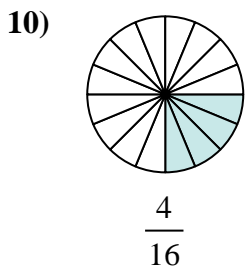
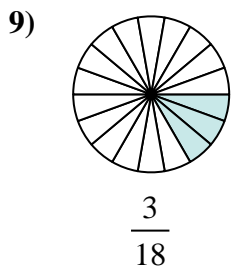
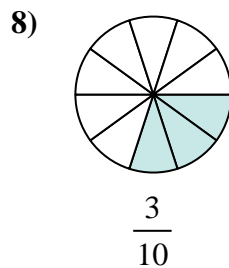
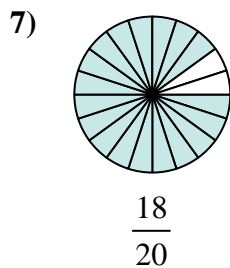
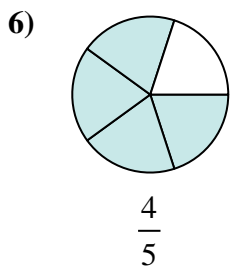
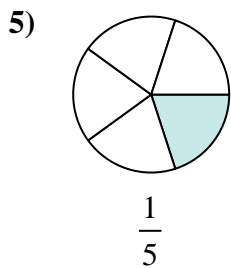
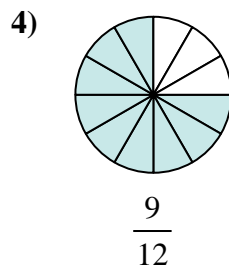
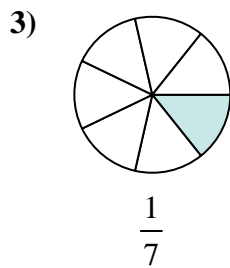
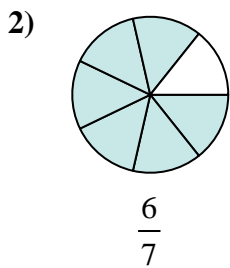
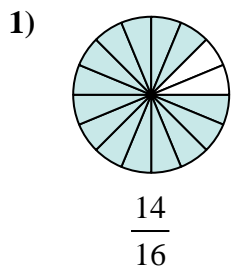
**Answers**



1. \_\_\_\_\_
2. \_\_\_\_\_
3. \_\_\_\_\_
4. \_\_\_\_\_
5. \_\_\_\_\_
6. \_\_\_\_\_
7. \_\_\_\_\_
8. \_\_\_\_\_
9. \_\_\_\_\_
10. \_\_\_\_\_
11. \_\_\_\_\_
12. \_\_\_\_\_



Determine which letter best represents an equivalent fraction.



**Answers**

1. **B**

2. **E**

3. **I**

4. **C**

5. **K**

6. **L**

7. **F**

8. **G**

9. **J**

10. **A**

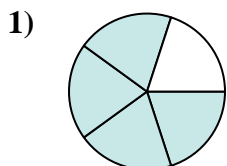
11. **H**

12. **D**

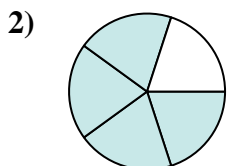


Determine which letter best represents an equivalent fraction.

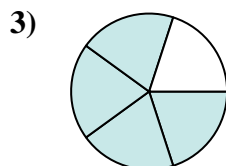
**Answers**



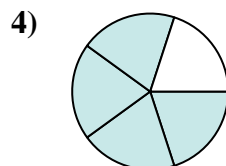
$$\frac{4 \times 2}{5 \times 2}$$



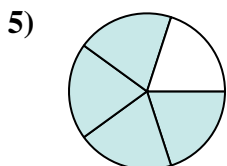
$$\frac{4 \times 2}{5 \times 2}$$



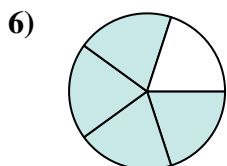
$$\frac{4 \times 2}{5 \times 2}$$



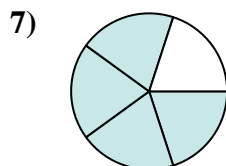
$$\frac{4 \times 2}{5 \times 2}$$



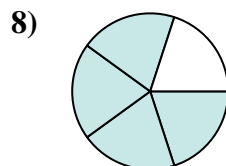
$$\frac{4 \times 2}{5 \times 2}$$



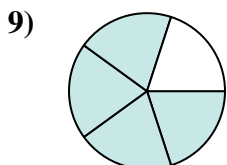
$$\frac{4 \times 2}{5 \times 2}$$



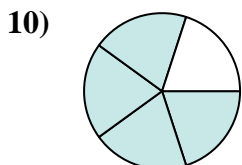
$$\frac{4 \times 2}{5 \times 2}$$



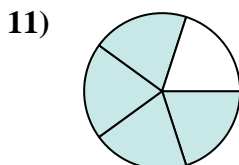
$$\frac{4 \times 2}{5 \times 2}$$



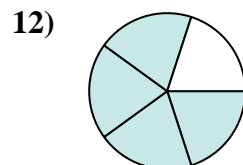
$$\frac{4 \times 2}{5 \times 2}$$



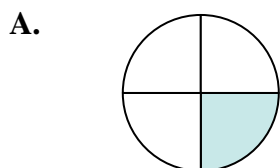
$$\frac{4 \times 2}{5 \times 2}$$



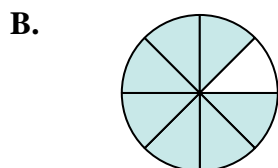
$$\frac{4 \times 2}{5 \times 2}$$



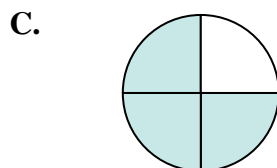
$$\frac{4 \times 2}{5 \times 2}$$



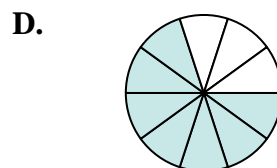
$$\frac{1}{4}$$



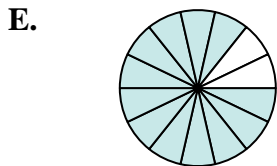
$$\frac{7}{8}$$



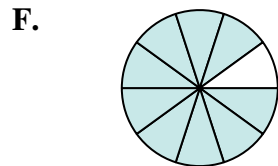
$$\frac{3}{4}$$




$$\frac{7}{10}$$



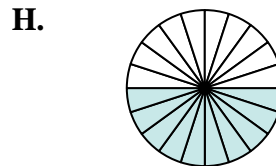
$$\frac{12}{14}$$



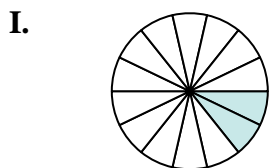
$$\frac{9}{10}$$



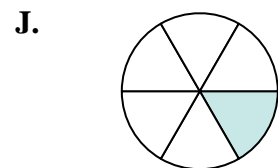
$$\frac{6}{20}$$



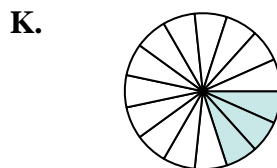
$$\frac{10}{20}$$



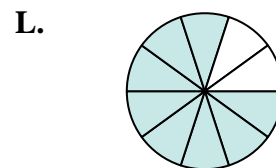
$$\frac{2}{14}$$



$$\frac{1}{6}$$



$$\frac{3}{15}$$



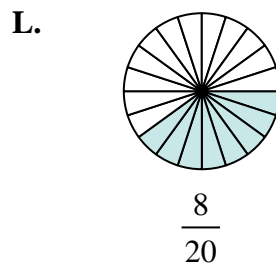
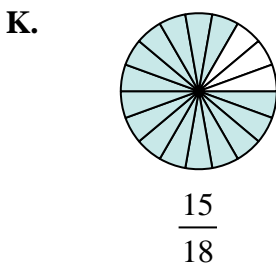
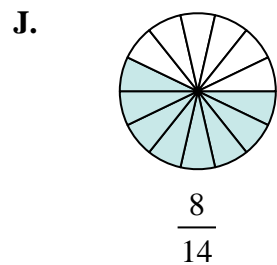
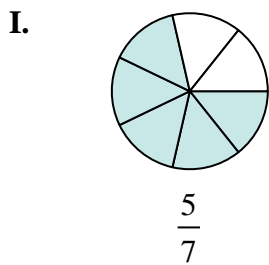
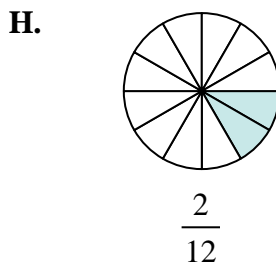
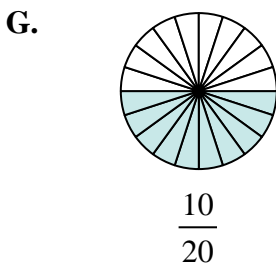
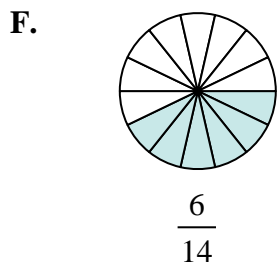
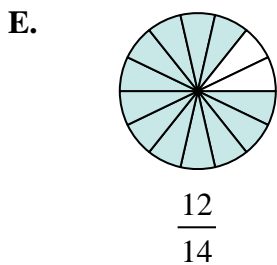
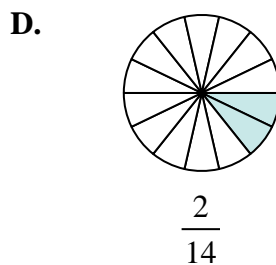
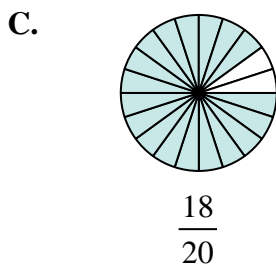
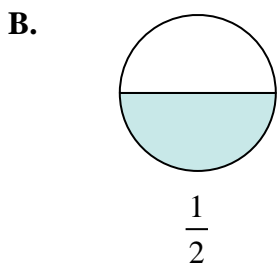
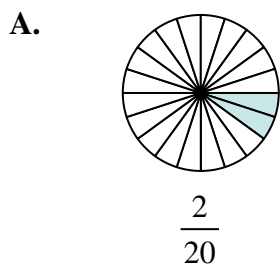
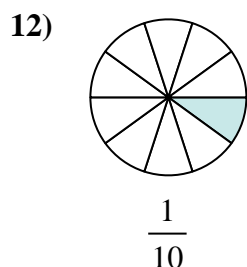
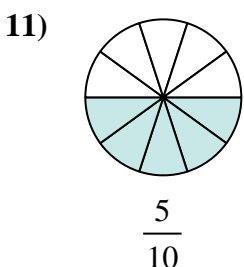
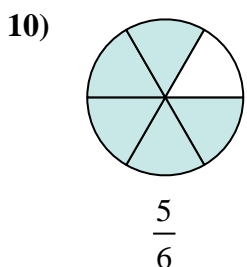
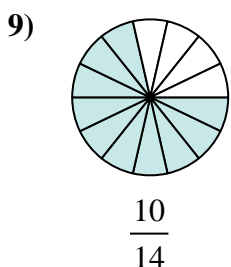
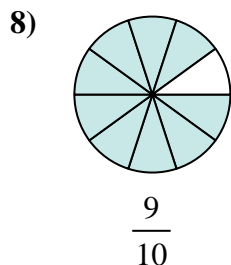
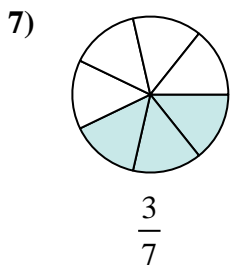
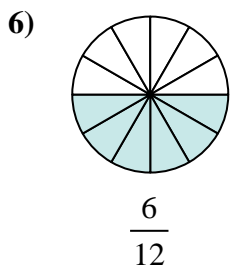
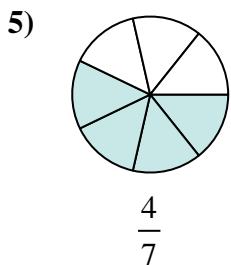
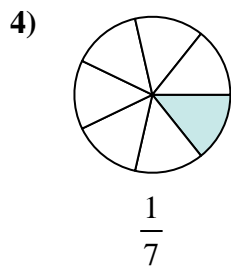
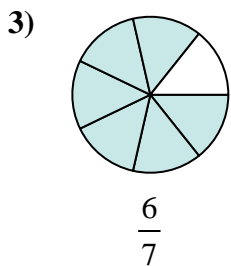
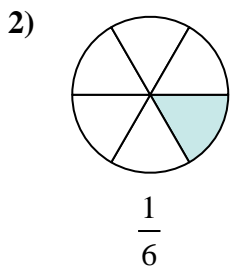
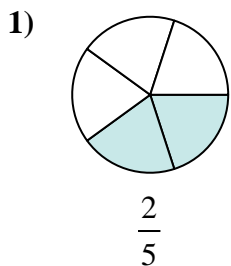
$$\frac{8}{10}$$

1. \_\_\_\_\_
2. \_\_\_\_\_
3. \_\_\_\_\_
4. \_\_\_\_\_
5. \_\_\_\_\_
6. \_\_\_\_\_
7. \_\_\_\_\_
8. \_\_\_\_\_
9. \_\_\_\_\_
10. \_\_\_\_\_
11. \_\_\_\_\_
12. \_\_\_\_\_



Determine which letter best represents an equivalent fraction.

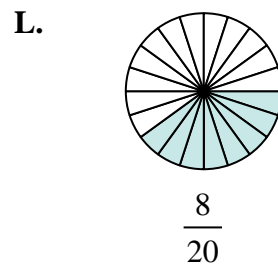
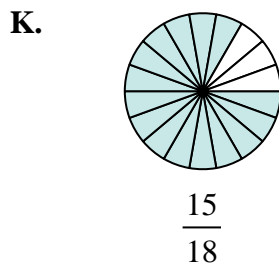
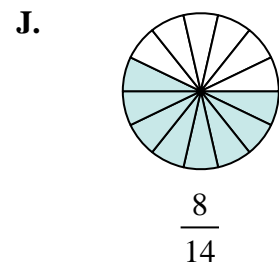
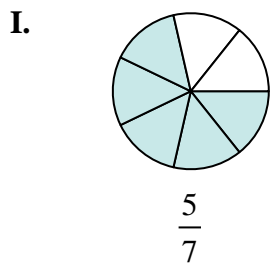
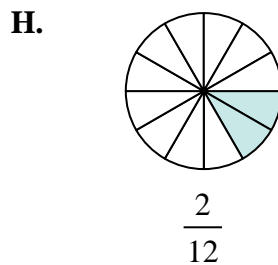
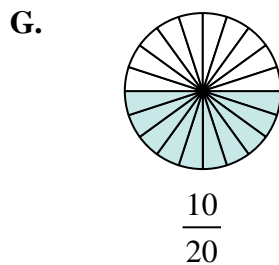
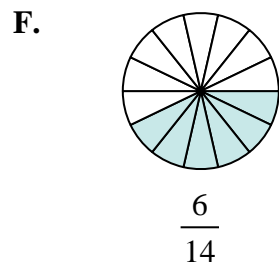
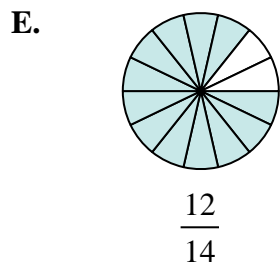
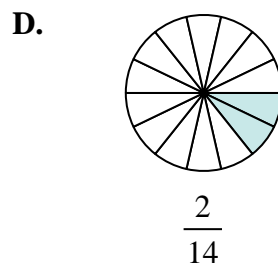
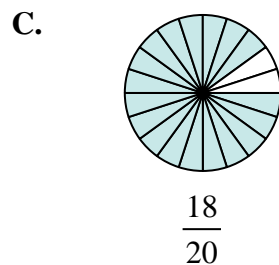
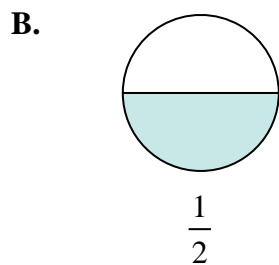
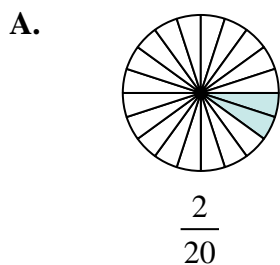
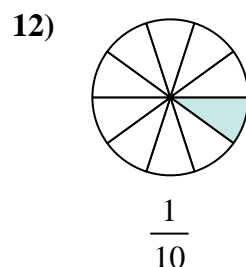
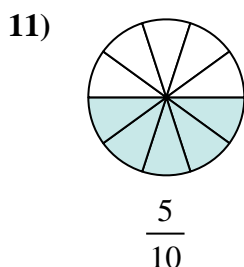
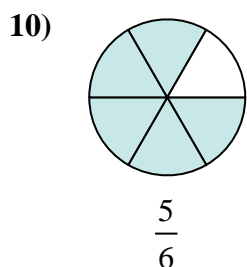
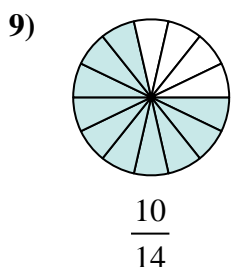
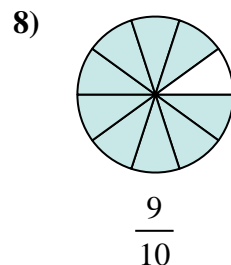
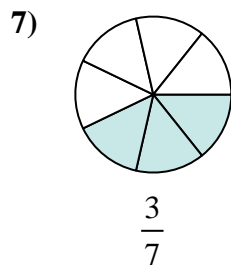
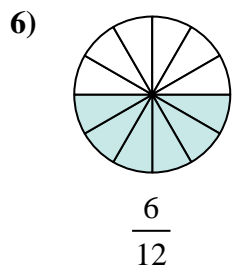
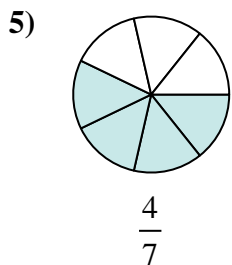
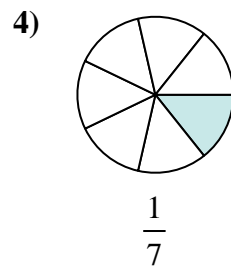
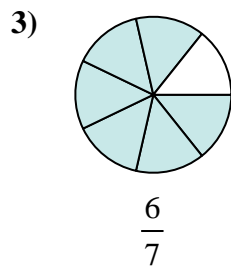
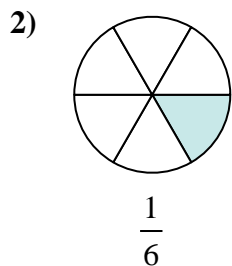
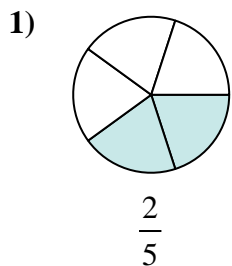
**Answers**



1. \_\_\_\_\_
2. \_\_\_\_\_
3. \_\_\_\_\_
4. \_\_\_\_\_
5. \_\_\_\_\_
6. \_\_\_\_\_
7. \_\_\_\_\_
8. \_\_\_\_\_
9. \_\_\_\_\_
10. \_\_\_\_\_
11. \_\_\_\_\_
12. \_\_\_\_\_



Determine which letter best represents an equivalent fraction.



**Answers**

1.   **L**  

2.   **H**  

3.   **E**  

4.   **D**  

5.   **J**  

6.   **B**  

7.   **F**  

8.   **C**  

9.   **I**  

10.   **K**  

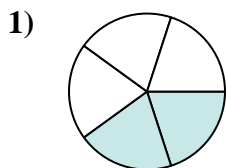
11.   **G**  

12.   **A**

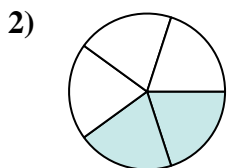


Determine which letter best represents an equivalent fraction.

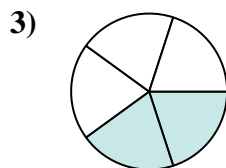
**Answers**



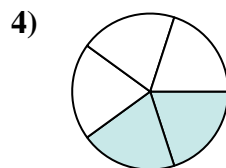
$$\frac{2 \times 4}{5 \times 4}$$



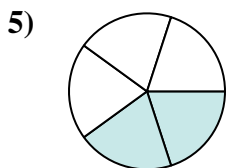
$$\frac{2 \times 4}{5 \times 4}$$



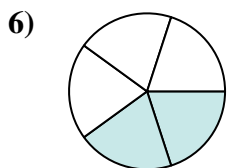
$$\frac{2 \times 4}{5 \times 4}$$



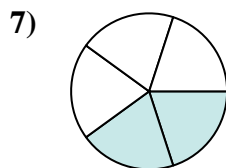
$$\frac{2 \times 4}{5 \times 4}$$



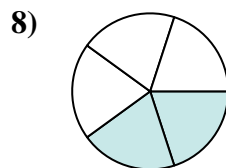
$$\frac{2 \times 4}{5 \times 4}$$



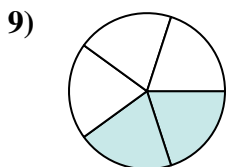
$$\frac{2 \times 4}{5 \times 4}$$



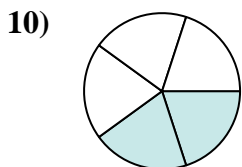
$$\frac{2 \times 4}{5 \times 4}$$



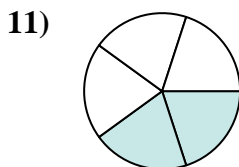
$$\frac{2 \times 4}{5 \times 4}$$



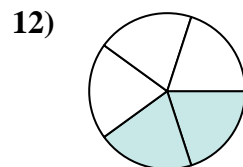
$$\frac{2 \times 4}{5 \times 4}$$



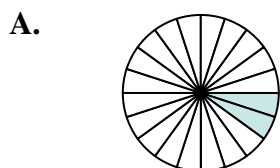
$$\frac{2 \times 4}{5 \times 4}$$



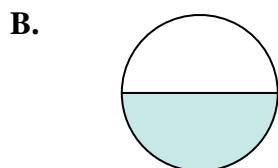
$$\frac{2 \times 4}{5 \times 4}$$



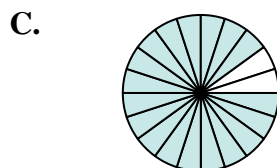
$$\frac{2 \times 4}{5 \times 4}$$



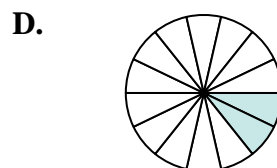
$$\frac{2}{20}$$



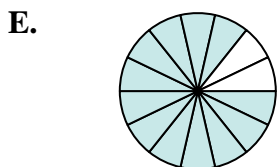
$$\frac{1}{2}$$



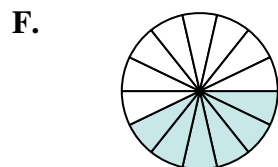
$$\frac{18}{20}$$



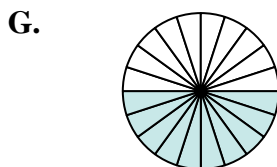
$$\frac{2}{14}$$



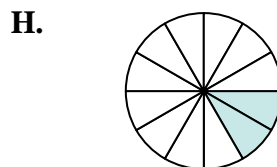
$$\frac{12}{14}$$



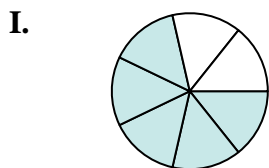
$$\frac{6}{14}$$



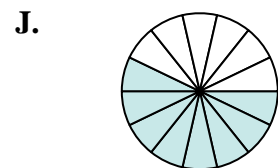
$$\frac{10}{20}$$



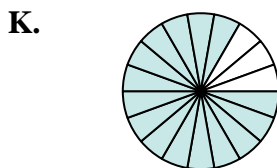
$$\frac{2}{12}$$




$$\frac{5}{7}$$



$$\frac{8}{14}$$



$$\frac{15}{18}$$



$$\frac{8}{20}$$

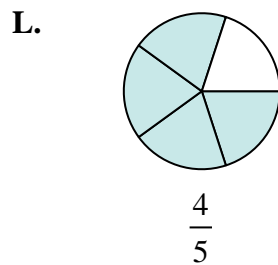
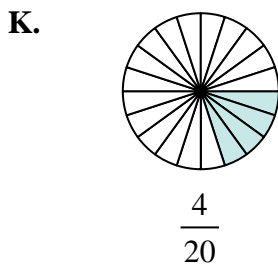
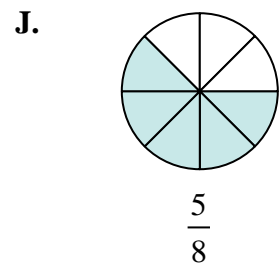
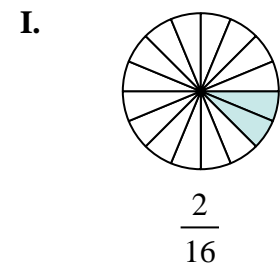
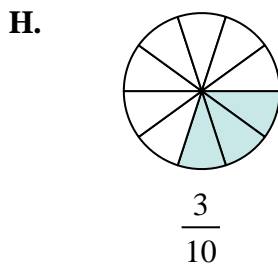
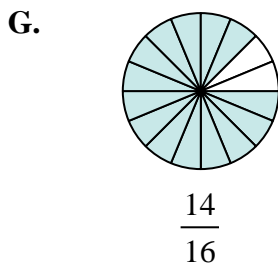
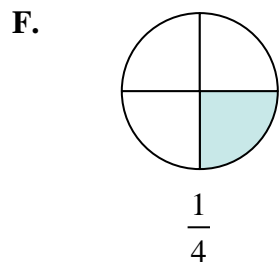
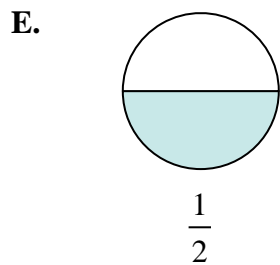
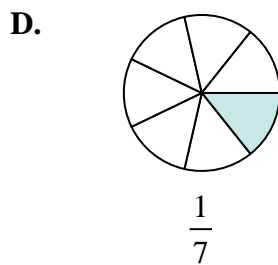
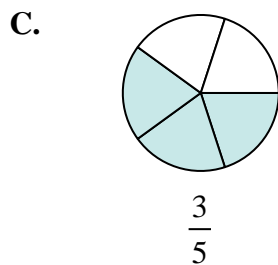
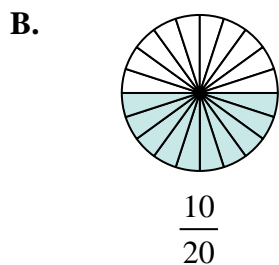
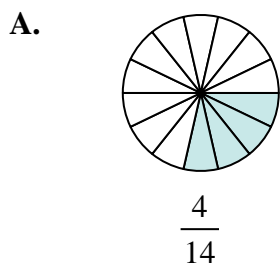
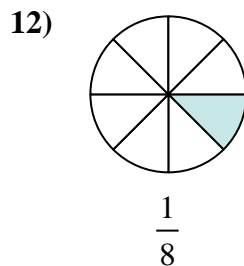
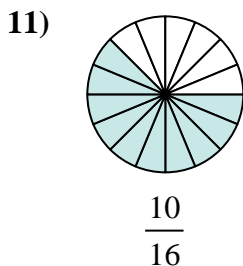
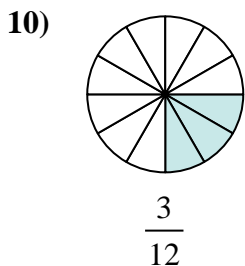
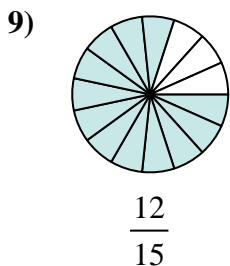
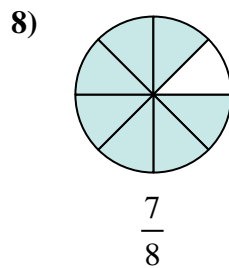
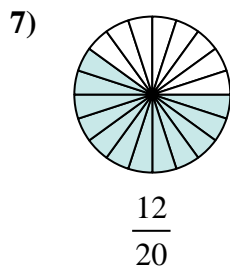
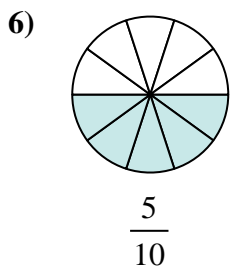
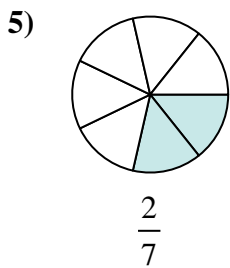
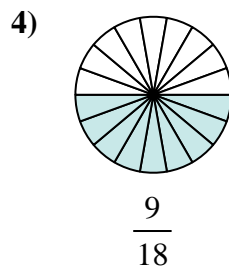
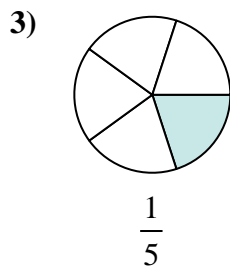
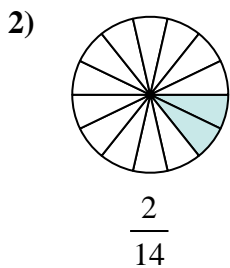
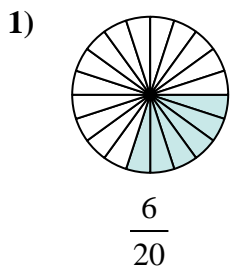
1. \_\_\_\_\_
2. \_\_\_\_\_
3. \_\_\_\_\_
4. \_\_\_\_\_
5. \_\_\_\_\_
6. \_\_\_\_\_
7. \_\_\_\_\_
8. \_\_\_\_\_
9. \_\_\_\_\_
10. \_\_\_\_\_
11. \_\_\_\_\_
12. \_\_\_\_\_





Determine which letter best represents an equivalent fraction.

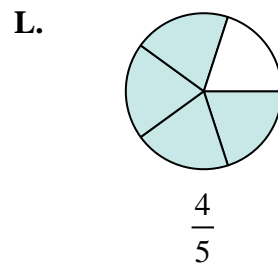
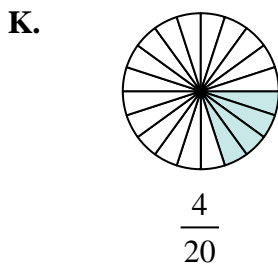
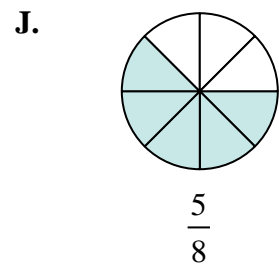
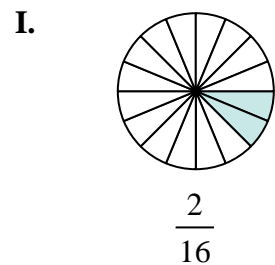
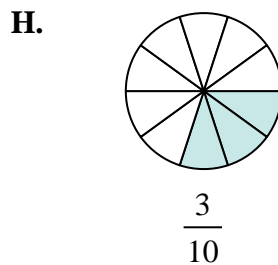
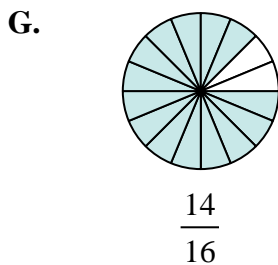
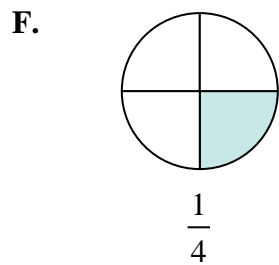
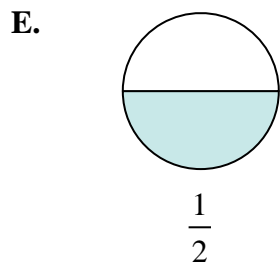
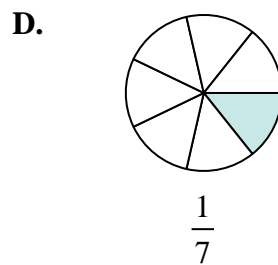
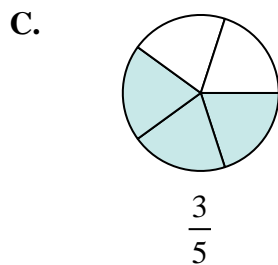
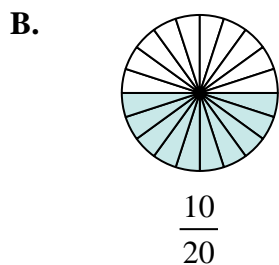
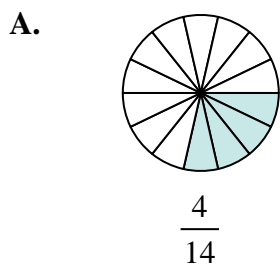
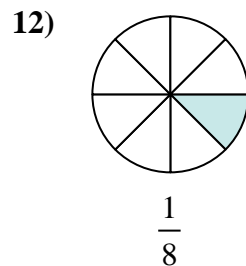
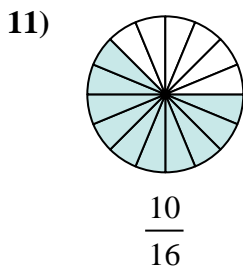
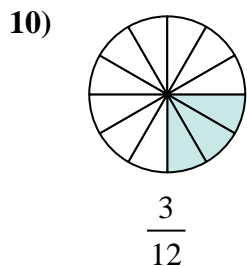
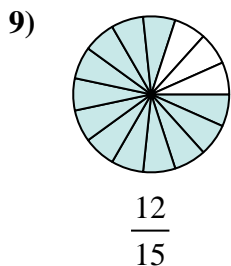
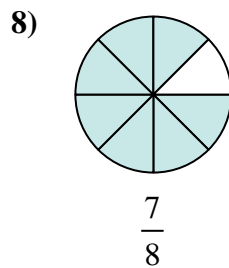
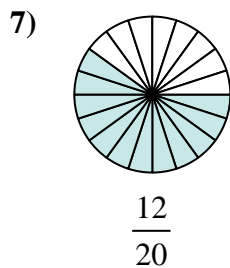
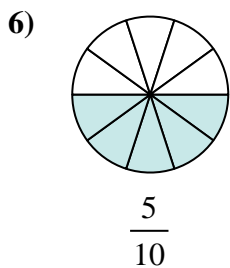
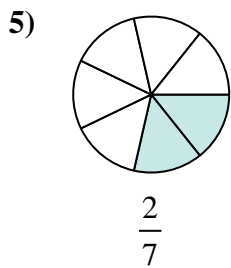
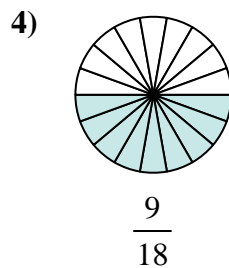
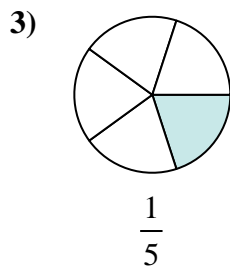
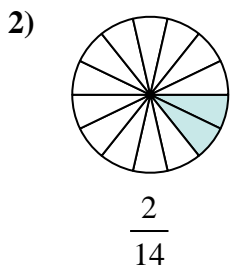
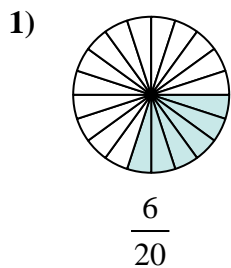
**Answers**



1. \_\_\_\_\_
2. \_\_\_\_\_
3. \_\_\_\_\_
4. \_\_\_\_\_
5. \_\_\_\_\_
6. \_\_\_\_\_
7. \_\_\_\_\_
8. \_\_\_\_\_
9. \_\_\_\_\_
10. \_\_\_\_\_
11. \_\_\_\_\_
12. \_\_\_\_\_



Determine which letter best represents an equivalent fraction.



**Answers**

1. **H**

2. **D**

3. **K**

4. **E**

5. **A**

6. **B**

7. **C**

8. **G**

9. **L**

10. **F**

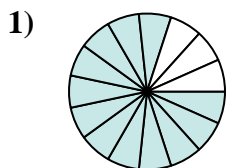
11. **J**

12. **I**

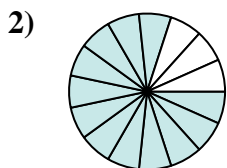


Determine which letter best represents an equivalent fraction.

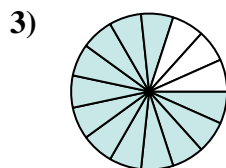
**Answers**



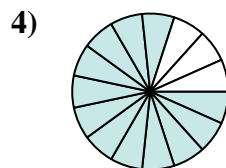
$$\frac{12 \times 3}{15 \times 3}$$



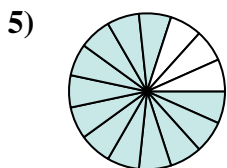
$$\frac{12 \times 3}{15 \times 3}$$



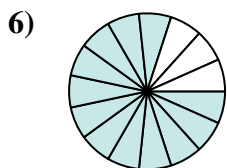
$$\frac{12 \times 3}{15 \times 3}$$



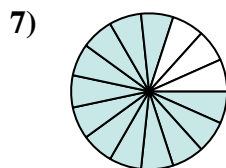
$$\frac{12 \times 3}{15 \times 3}$$



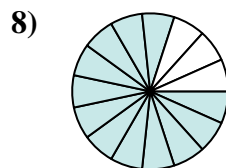
$$\frac{12 \times 3}{15 \times 3}$$



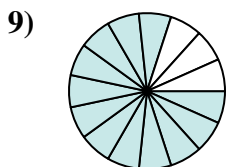
$$\frac{12 \times 3}{15 \times 3}$$



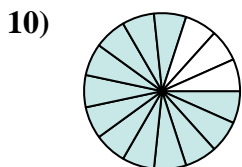
$$\frac{12 \times 3}{15 \times 3}$$



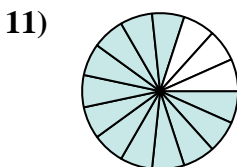
$$\frac{12 \times 3}{15 \times 3}$$



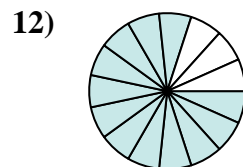
$$\frac{12 \times 3}{15 \times 3}$$



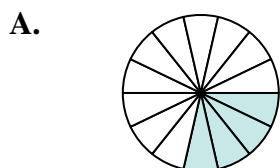
$$\frac{12 \times 3}{15 \times 3}$$



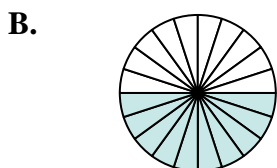
$$\frac{12 \times 3}{15 \times 3}$$



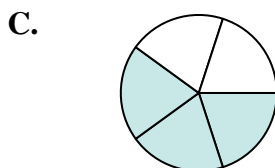
$$\frac{12 \times 3}{15 \times 3}$$



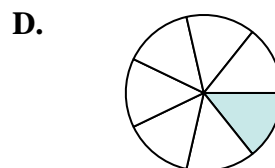
$$\frac{4}{14}$$



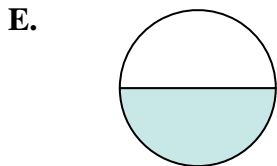
$$\frac{10}{20}$$



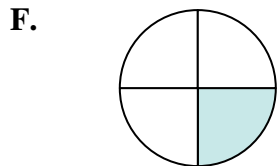
$$\frac{3}{5}$$



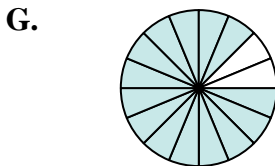
$$\frac{1}{7}$$



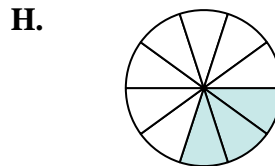
$$\frac{1}{2}$$



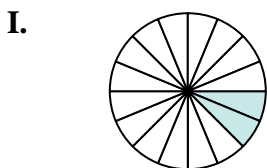
$$\frac{1}{4}$$



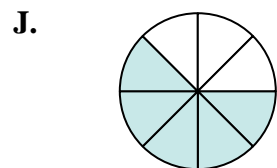
$$\frac{14}{16}$$




$$\frac{3}{10}$$



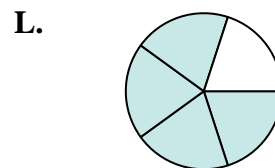
$$\frac{2}{16}$$



$$\frac{5}{8}$$



$$\frac{4}{20}$$



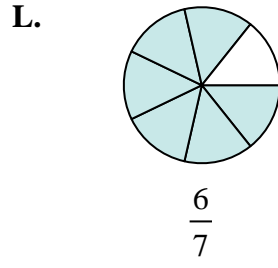
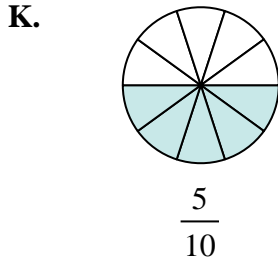
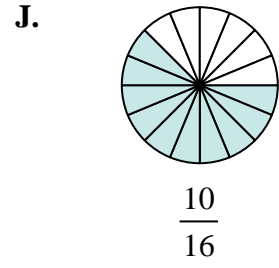
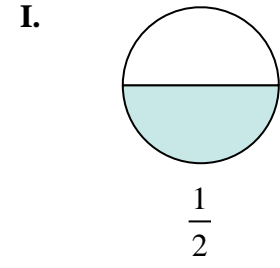
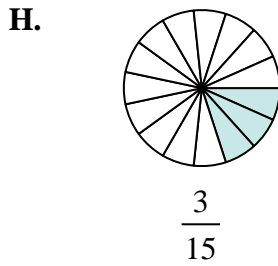
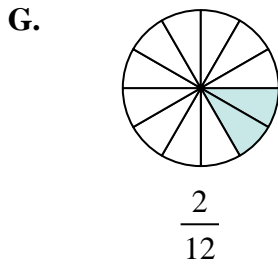
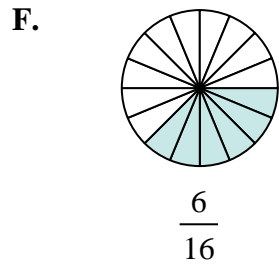
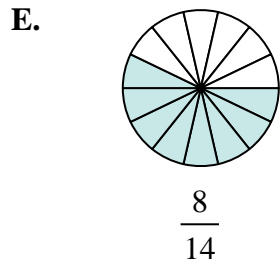
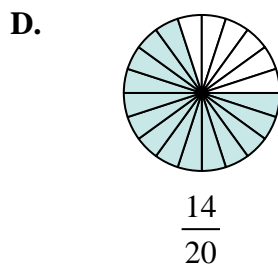
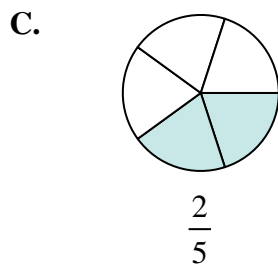
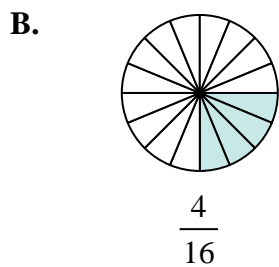
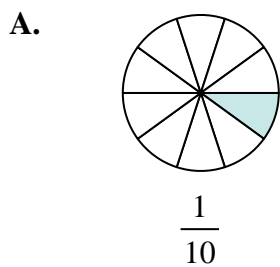
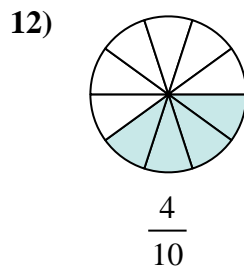
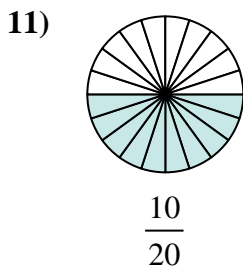
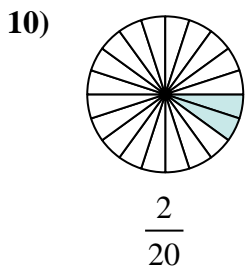
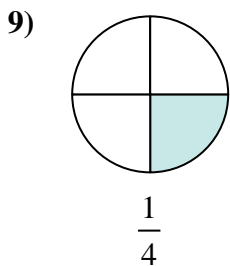
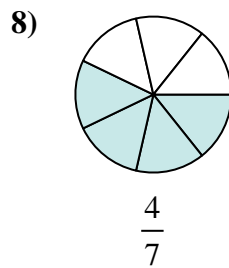
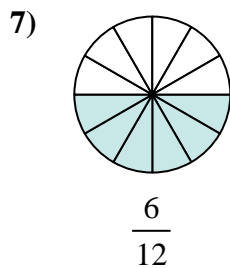
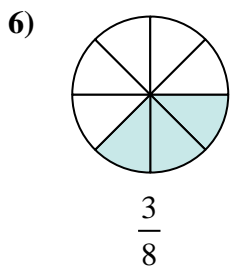
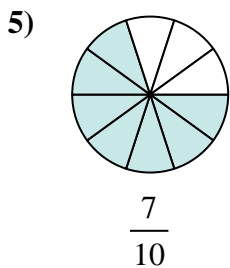
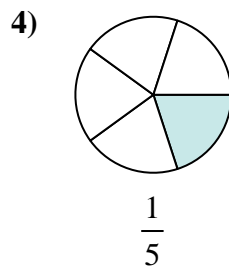
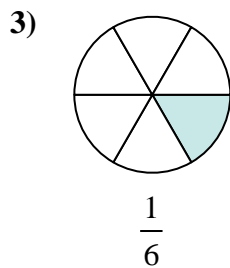
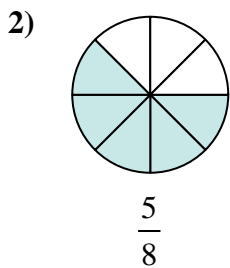
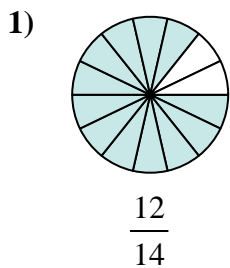
$$\frac{4}{5}$$

1. \_\_\_\_\_
2. \_\_\_\_\_
3. \_\_\_\_\_
4. \_\_\_\_\_
5. \_\_\_\_\_
6. \_\_\_\_\_
7. \_\_\_\_\_
8. \_\_\_\_\_
9. \_\_\_\_\_
10. \_\_\_\_\_
11. \_\_\_\_\_
12. \_\_\_\_\_



Determine which letter best represents an equivalent fraction.

**Answers**

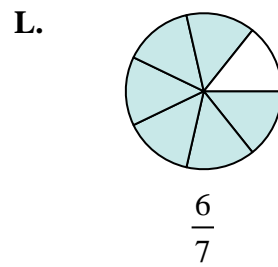
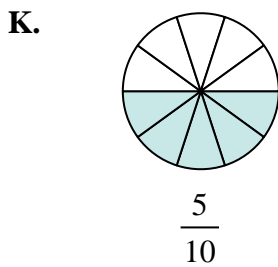
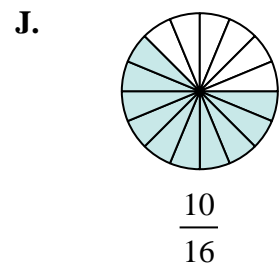
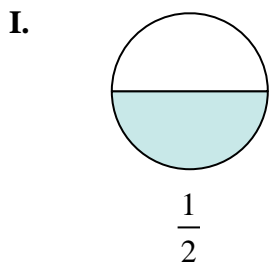
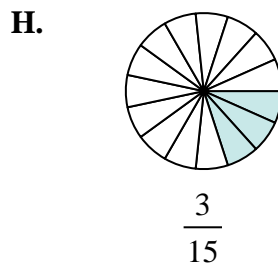
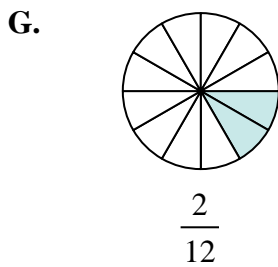
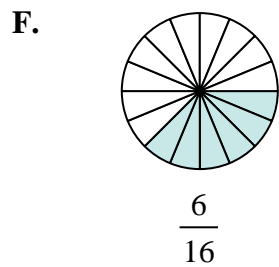
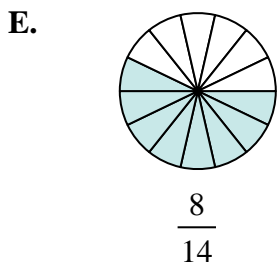
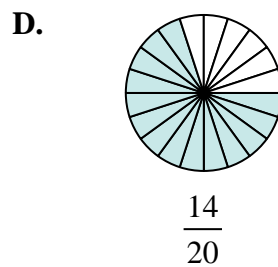
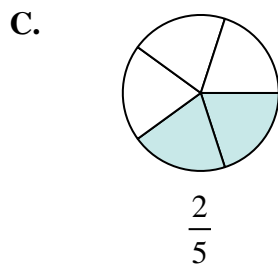
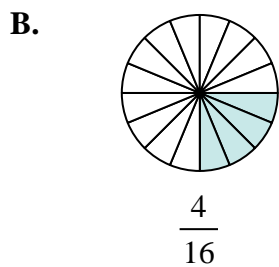
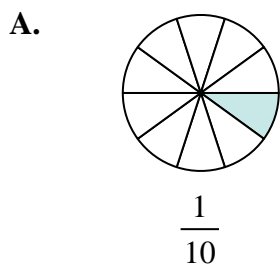
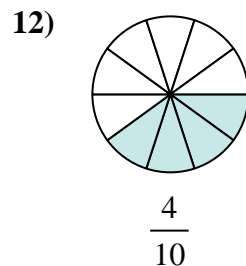
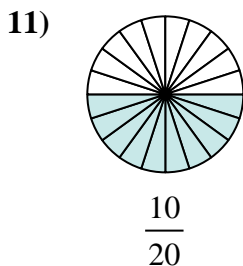
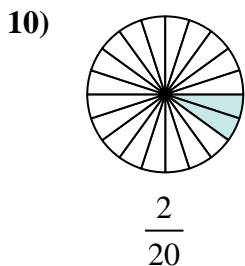
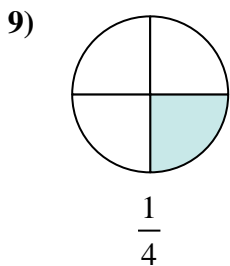
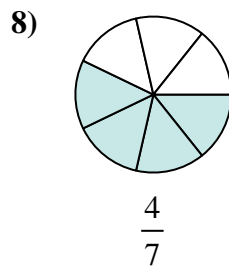
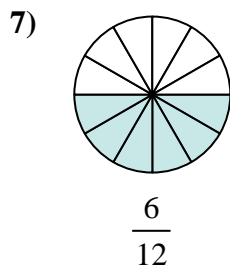
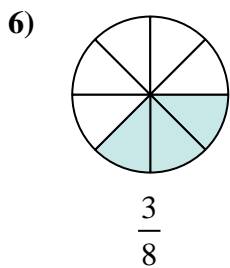
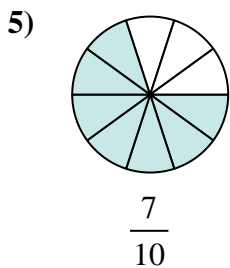
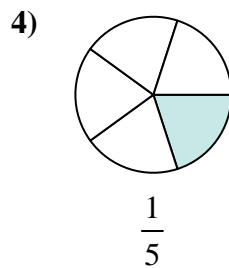
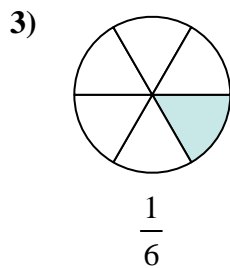
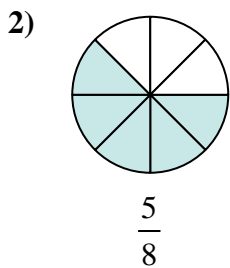
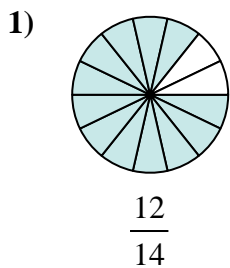


1. \_\_\_\_\_
2. \_\_\_\_\_
3. \_\_\_\_\_
4. \_\_\_\_\_
5. \_\_\_\_\_
6. \_\_\_\_\_
7. \_\_\_\_\_
8. \_\_\_\_\_
9. \_\_\_\_\_
10. \_\_\_\_\_
11. \_\_\_\_\_
12. \_\_\_\_\_



Determine which letter best represents an equivalent fraction.

**Answers**



1.   **L**  

2.   **J**  

3.   **G**  

4.   **H**  

5.   **D**  

6.   **F**  

7.   **I**  

8.   **E**  

9.   **B**  

10.   **A**  

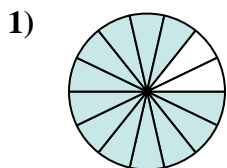
11.   **K**  

12.   **C**

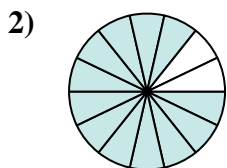


Determine which letter best represents an equivalent fraction.

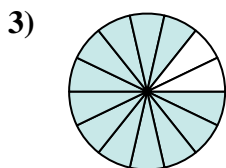
**Answers**



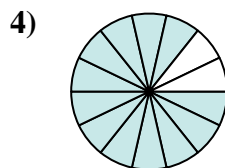
$$\frac{12 \times 2}{14 \times 2}$$



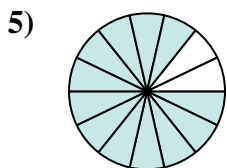
$$\frac{12 \times 2}{14 \times 2}$$



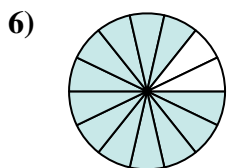
$$\frac{12 \times 2}{14 \times 2}$$



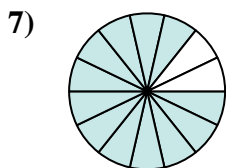
$$\frac{12 \times 2}{14 \times 2}$$



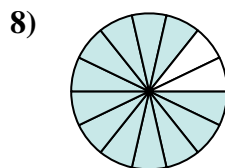
$$\frac{12 \times 2}{14 \times 2}$$



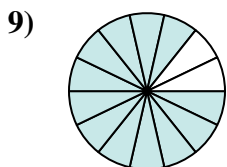
$$\frac{12 \times 2}{14 \times 2}$$



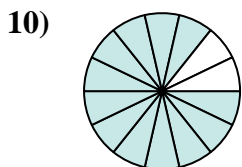
$$\frac{12 \times 2}{14 \times 2}$$



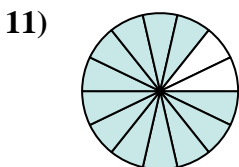
$$\frac{12 \times 2}{14 \times 2}$$



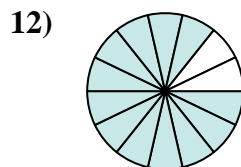
$$\frac{12 \times 2}{14 \times 2}$$



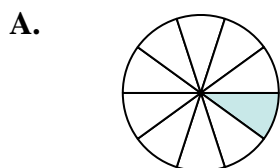
$$\frac{12 \times 2}{14 \times 2}$$




$$\frac{12 \times 2}{14 \times 2}$$



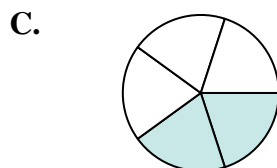
$$\frac{12 \times 2}{14 \times 2}$$



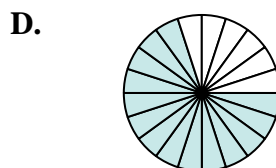
$$\frac{1}{10}$$



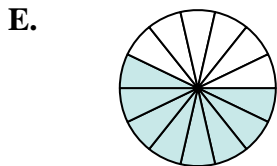
$$\frac{4}{16}$$



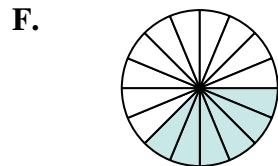
$$\frac{2}{5}$$



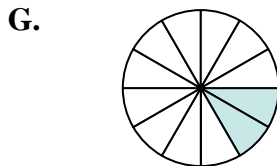
$$\frac{14}{20}$$



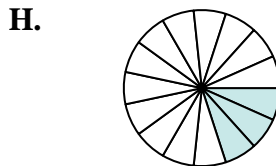
$$\frac{8}{14}$$



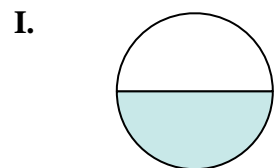
$$\frac{6}{16}$$



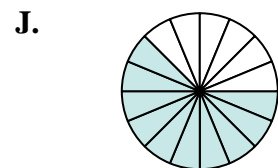
$$\frac{2}{12}$$



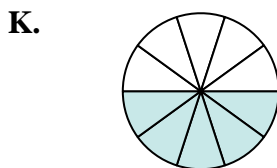
$$\frac{3}{15}$$



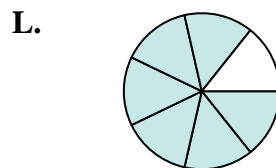
$$\frac{1}{2}$$



$$\frac{10}{16}$$



$$\frac{5}{10}$$



$$\frac{6}{7}$$

1. \_\_\_\_\_
2. \_\_\_\_\_
3. \_\_\_\_\_
4. \_\_\_\_\_
5. \_\_\_\_\_
6. \_\_\_\_\_
7. \_\_\_\_\_
8. \_\_\_\_\_
9. \_\_\_\_\_
10. \_\_\_\_\_
11. \_\_\_\_\_
12. \_\_\_\_\_